

MBA

1 of 100

141 PU_2016_MBA_E

Find the wrong number in the sequence: 52, 51, 48, 43, 34, 27, 16.

- 43
- 34
- 48
- 27

2 of 100

182 PU_2016_MBA_E

Direction: Read the following paragraph and answer the question given below.

Three friends A, B and C respectively have Rs. 160, Rs. 120 and Rs. 80. They started playing a game in which the person who has the maximum money gives to both the persons an amount equal to half the difference between his amount and the respective person's amount. The game stops when the difference between the amounts of any two of them has, is less than Rs.5.

What would be the amount with C at the end of the game?

- 117.5
- 122.5
- 115
- 120

3 of 100

183 PU_2016_MBA_E

A is the mother of B's father C has three children. Based on this information state which of the following statements is definitely true?

- B is a male child
- A has three children
- C has three sons
- C has three daughters

4 of 100

143 PU_2016_MBA_E

Three individuals X, Y, Z hired a car on a sharing basis and paid Rs. 1,040. They used it for 7, 8, 11 hours, respectively. What are the charges paid by Y?

- Rs. 440
- Rs. 320
- Rs. 290
- Rs. 360

5 of 100

165 PU_2016_MBA_E

The perimeter of a rectangular field is 480 meters and the ratio between the length and breadth is 5:3. The area is _____.

- 155 Sq.M
- 13.5 Sq.M
- 1550 Sq.M
- 13500 Sq.M

6 of 100

124 PU_2016_MBA_E

Direction: Read the following passage and answer the question that follow.

What is immediately needed today is the establishment of a World Government or an International Federation of Mankind. It is the utmost necessity of the world today, and all those persons who wish to see all human beings happy and prosperous naturally feel it keenly. Of course, at times, we all feel that many of our problems of our political, social and cultural life would come to an end if there were one Government all over the world. Travelers, businessmen, seekers of knowledge and teachers of righteousness know very well that great impediments and obstructions are faced by them when they pass from one country to another, exchange goods, get information, and make an effort to spread their good gospel among their fellow-men.

In the past, religious sects divided one set of people against another, colour of the skin or construction of the body set one against the other. But today when philosophical light has exploded the darkness that was created by religious differences, and when scientific knowledge has falsified the theory of social superiority and when modern inventions have enabled human beings of all religious views and of all races and colours to come in frequent contact with one another, it is the governments of various countries that keep people of one country apart from those of another. They create artificial barriers, unnatural distinctions, unhealthy isolation, unnecessary fears and dangers in the minds of the common men who by their nature want to live in friendship with their fellow-men. But all these evils would cease to exist if there were one Government all over the world.

The most suitable title for this passage would be:-

- Religion and Race in modern times
- The perils of National Government
- One happy world
- The challenges of Mankind

7 of 100

101 PU_2016_MBA_E

Direction: For the following question, a part or the whole of the original sentence has been underlined. Find out the best way of writing the underlined part of the sentence.

It is probable that the prototype device might be ready for testing around the end of next year.

- might be ready for testing toward next year's end
- will be ready for testing toward the end of next year
- may be ready for testing about the end of next year
- might be ready for testing around the end of next year

8 of 100

146 PU_2016_MBA_E

Six persons A, B, C, D, E and F are standing in a circle. B is between F and C, A is between E and D, F is to the left of Who is between A and F?

- D
- E
- B
- C

9 of 100

206 PU_2016_MBA_E

Find the term which would replace the question mark (?)?

CBQ, ? , QPE

- FZU
- GFU
- FGU
- FUG

10 of 100

186 PU_2016_MBA_E

If '+' means '÷', 'x' means '___', '÷' means 'x', and '___' means '+' then $15 \times 5 \div 3 + 1 - 1 = ?$

- 1
- 3
- 2
- 1

11 of 100

184 PU_2016_MBA_E

Ram is the brother of Shyam, and Mahesh is the father of Ram. Jagat is the brother of Priya and Priya is the daughter of Shyam. Who is the uncle of Jagat?

- Ram
- Mahesh
- Jagat
- Shyam

12 of 100

185 PU_2016_MBA_E

If '+' means '÷', 'x' means '___', '÷' means 'x', and '___' means '+' then $8 + 6 \times 4 \div 3 - 4 = ?$

- 12
- 20/3

- 20/3
- 14 ²/₃

13 of 100

126 PU_2016_MBA_E

Direction: Read the following passage and answer the question that follow.

One of the most successful commercial products ever launched is said to have come about as the result of a mistake. In 1896, Jacob's pharmacy in Atlanta, Georgia in the US, was selling a nerve tonic known as 'French Wine Cola - Ideal Nerve Tonic'. By accidentally adding fizzy water instead of still water to the recipe, a pharmacist called John S. Pemberton invented what has today become the most popular soft drink in the world: Coca-cola. What could possibly account for the amazing success of Coca-Cola? How has this combination of carbonated water, sugar, acid and flavourings come to symbolize the American way of life for most of the world? After all, even the manufacturers could hardly describe Coke as a healthy product since it contains relatively high amount of sugar and phosphoric acid, both of which are known to damage teeth.

One explanation may be found in the name. The original recipe included a flavouring from the coca plant and probably included small amounts of cocaine (an addictive substance), but since the early part of this century, all traces of cocaine have been removed. However, Coke also includes a flavouring from the cola tree; cola extract contains caffeine, which is a stimulant, and the Coca-Cola company adds extra caffeine for good measure. While caffeine is not thought to be an addictive substance in itself, there is considerable evidence that over a period of time, the consumption of caffeine has to be increased in order for its stimulating effect to be maintained, and so sales of Coke perhaps benefit as a result.

A more likely reason for the enduring popularity of Coke may, however, be found in the company's enviable marketing strategies. Over the years, it has come up with some of the most memorable ads, tunes, slogans and sponsorships in the world of advertising, emphasizing international harmony, youthfulness and a carefree lifestyle. Few other companies (arguably including Pepsi, the chief competitor to Coca-Cola) have been able to match such marketing ploys so consistently or effectively. As suggested earlier, the influences of American culture are evident just about everywhere, and Coca-cola has somehow come to represent a vision of the US that much of the rest of the world dreams about and aspires for. Perhaps drinking Coke brings people that little bit closer to the dream.

According to the passage, Coke has enjoyed amazing success. It suggests that the author:-

- thinks that the success of Coke is very strange
- believes that the success of Coke has been impressive
- thinks that the success of Coke is beyond explanation
- considers the success of Coke to be undeserved

14 of 100

189 PU_2016_MBA_E

Direction: Consider the information given below and answer the following question.

- (i) Six students A,B,C,D, E and F participated in a self-evaluation test of quants and Data Interpretation (DI).
- (ii) The total marks of A in Quants was just above C and in DI just above F
- (iii) B was just above C in DI but he scored less than D in Quants
- (iv) F got more marks than D and E in DI but did not perform as well in Quants as DI
- (v) No one is in between C and D in quants and C and A in DI

Who got the highest marks in DI?

- C
- A
- B
- Data inadequate

15 of 100

127 PU_2016_MBA_E

Direction: Read the following passage and answer the question that follow.

One of the most successful commercial products ever launched is said to have come about as the result of a mistake. In 1896, Jacob's pharmacy in Atlanta, Georgia in the US, was selling a nerve tonic known as 'French Wine Cola - Ideal Nerve Tonic'. By accidentally adding fizzy water instead of still water to the recipe, a pharmacist called John S. Pemberton invented what has today become the most popular soft drink in the world: Coca-cola. What could possibly account for the amazing success of Coca-Cola? How has this combination of carbonated water, sugar, acid and flavourings come to symbolize the American way of life for most of the world? After all, even the manufacturers could hardly describe Coke as a healthy product since it contains relatively high amount of sugar and phosphoric acid, both of which are known to damage teeth.

One explanation may be found in the name. The original recipe included a flavouring from the coca plant and probably included small amounts of cocaine (an addictive substance), but since the early part of this century, all traces of cocaine have been removed. However, Coke also includes a flavouring from the cola tree; cola extract contains caffeine, which is a stimulant, and the Coca-Cola company adds extra caffeine for good measure. While caffeine is not thought to be an addictive substance in itself, there is considerable evidence that over a period of time, the consumption of caffeine has to be increased in order for its stimulating effect to be maintained, and so sales of Coke perhaps benefit as a result.

A more likely reason for the enduring popularity of Coke may, however, be found in the company's enviable marketing strategies. Over the years, it has come up with some of the most memorable ads, tunes, slogans and sponsorships in the world of advertising, emphasizing international harmony, youthfulness and a carefree lifestyle. Few other companies (arguably including Pepsi, the chief competitor to Coca-Cola) have been able to match such marketing ploys so consistently or effectively. As suggested earlier, the influences of American culture are evident just about everywhere, and Coca-cola has somehow come to represent a vision of the US that much of the rest of the world dreams about and aspires for. Perhaps drinking Coke brings people that little bit closer to the dream.

Describing Coke's marketing strategies as 'enviable' in the passage, the author means that:-

- the strategies are based on envy
- People are persuaded to buy Coke because they are envious of America
- Coke's marketing strategists are encouraged to be envious of each other's ideas
- Rivals are envious of Coke's successful methods of marketing

16 of 100

122 PU_2016_MBA_E

Direction: Read the following passage and answer the question that follow.

What is immediately needed today is the establishment of a World Government or an International Federation of Mankind. It is the utmost necessity of the world today, and all those persons who wish to see all human beings happy and prosperous naturally feel it keenly. Of course, at times, we all feel that many of our problems of our political, social and cultural life would come to an end if there were one Government all over the world. Travelers, businessmen, seekers of knowledge and teachers of righteousness know very well that great impediments and obstructions are faced by them when they pass

from one country to another, exchange goods, get information, and make an effort to spread their good gospel among their fellow-men.

In the past, religious sects divided one set of people against another, colour of the skin or construction of the body set one against the other. But today when philosophical light has exploded the darkness that was created by religious differences, and when scientific knowledge has falsified the theory of social superiority and when modern inventions have enabled human beings of all religious views and of all races and colours to come in frequent contact with one another, it is the governments of various countries that keep people of one country apart from those of another. They create artificial barriers, unnatural distinctions, unhealthy isolation, unnecessary fears and dangers in the minds of the common men who by their nature want to live in friendship with their fellow-men. But all these evils would cease to exist if there were one Government all over the world.

What will the World Government be expected to do?

- It will kill the religions created by man
- It will bring about universal happiness and prosperity
- It will bring about a moral regeneration of mankind
- It will end all wars for all time to come

17 of 100

204 PU_2016_MBA_E

Which of the following letters would come in place of the question mark (?) in the given series?

C, F, I, L, O, ?

- Q
- P
- S
- R

18 of 100

166 PU_2016_MBA_E

In what time will Rs. 500/- give Rs. 50/- as interest at the rate of 5% per annum, simple interest?

- 3 Years
- 5 Years
- 4 Years
- 2 Years

19 of 100

105 PU_2016_MBA_E

Direction: For the following question, a part or the whole of the original sentence has been underlined. Find out the best way of writing the underlined part of the sentence.

The famous engineers are working on this project right from the day they arrived here.

- had been working
- have been working

- would be working
- will have been working

20 of 100

145 PU_2016_MBA_E

Four pipes can fill a reservoir in 15, 20, 30 and 60 hours respectively. The first one was opened at 6 AM, second at 7 AM, third at 8 AM and the fourth at 9 AM. When will the reservoir be filled?

- 1 PM
- 11 AM
- 1:30 PM
- 12 Noon

21 of 100

168 PU_2016_MBA_E

In a committee 50 people speak French and 20 speak Spanish and 10 speak both Spanish and French. The number of persons speaking at least one of the these two languages is _____.

- 38
- 48
- 60
- 40

22 of 100

209 PU_2016_MBA_E

Direction: Read the following passage and answer the question that follow.

Five leaders from undivided India - Pt. Nehru, M.K.Gandhi, Rajendra Prasad, Subhash Chandra Bose and Tyagi participated in the 2nd round-table conference at London in 1930. It was noted that Pt. Nehru sat two seats to the left of Rajendra Prasad and M.K.Gandhi sat two seats to the right of Rajendra Prasad.

If Subhash Chandra Bose sat between M.K.Gandhi and Rajendra Prasad, then who sat to the immediate right of Pt. Nehru?

- Tyagi
- Rajendra Prasad
- M.K.Gandhi
- Subhash Chandra Bose

23 of 100

202 PU_2016_MBA_E

Direction: Find the missing number in the given series.

1, 0, 5, 8, 17, 24, 37,

- 46
- 43
- 48

40

24 of 100

160 PU_2016_MBA_E

If the circumference and area of a circle are numerically equal, then the diameter is equal to _____.

- 3
- 4
- 1
- 2

25 of 100

169 PU_2016_MBA_E

Salary of a person is first increased by 20%, then it is decreased by 20%. Change in his salary is:-

- 4% decreased
- 20% increased
- 4% increased
- 8% increased

26 of 100

162 PU_2016_MBA_E

The price of a certain television set is discounted by 10% and the reduced price is again discounted by 10%. This series of successive discounts is equivalent to a single discount of _____.

- 19%
- 18%
- 11%
- 20%

27 of 100

109 PU_2016_MBA_E

Direction: For the following question, a part or the whole of the original sentence has been underlined. Find out the best way of writing the underlined part of the sentence.

The nuclear tests filled the air with radioactive gases and leaving the area inhabitable.

- and left the
- and making the
- and will leave the
- and leaves the

28 of 100

181 PU_2016_MBA_E

Direction: Read the following paragraph and answer the question given below.

Three friends A, B and C respectively have Rs. 160, Rs. 120 and Rs. 80. They started playing a game in which the person who has the maximum money gives to both the persons an amount equal to half the

difference between his amount and the respective person's amount. The game stops when the difference between the amounts of any two of them has, is less than Rs.5.

What would be the amount with B at the end of the game?

- 120
- 115
- 117.5
- 122.5

29 of 100

100 PU_2016_MBA_E

Direction: For the following question, a part or the whole of the original sentence has been underlined. Find out the best way of writing the underlined part of the sentence.

While larger banks can afford to maintain their own data-processing operations, many smaller regional and community banks are finding that the cost associated with upgrading data-processing equipment and with the development and maintenance of new products and technical staff are prohibitive.

- cost associated with
- costs associated with
- costs arising from
- cost of

30 of 100

163 PU_2016_MBA_E

The average wage of 500 workers was found to be Rs. 200/-. Later on, it is discovered that the wages of 2 workers were misread as 180 and 20, instead of 80 and 220. The correct average wage is _____.

- Rs. 201.00
- Rs. 200.10
- Rs. 200.20
- Rs. 200.50

31 of 100

129 PU_2016_MBA_E

Direction: Read the following passage and answer the question that follow.

One of the most successful commercial products ever launched is said to have come about as the result of a mistake. In 1896, Jacob's pharmacy in Atlanta, Georgia in the US, was selling a nerve tonic known as 'French Wine Cola - Ideal Nerve Tonic'. By accidentally adding fizzy water instead of still water to the recipe, a pharmacist called John S. Pemberton invented what has today become the most popular soft drink in the world: Coca-cola. What could possibly account for the amazing success of Coca-Cola? How has this combination of carbonated water, sugar, acid and flavourings come to symbolize the American way of life for most of the world? After all, even the manufacturers could hardly describe Coke as a healthy product since it contains relatively high amount of sugar and phosphoric acid, both of which are known to damage teeth.

One explanation may be found in the name. The original recipe included a flavouring from the coca plant and probably included small amounts of cocaine (an addictive substance), but since the early part of this century, all traces of cocaine have been removed. However, Coke also includes a flavouring from the cola

tree; cola extract contains caffeine, which is a stimulant, and the Coca-Cola company adds extra caffeine for good measure. While caffeine is not thought to be an addictive substance in itself, there is considerable evidence that over a period of time, the consumption of caffeine has to be increased in order for its stimulating effect to be maintained, and so sales of Coke perhaps benefit as a result.

A more likely reason for the enduring popularity of Coke may, however, be found in the company's enviable marketing strategies. Over the years, it has come up with some of the most memorable ads, tunes, slogans and sponsorships in the world of advertising, emphasizing international harmony, youthfulness and a carefree lifestyle. Few other companies (arguably including Pepsi, the chief competitor to Coca-Cola) have been able to match such marketing ploys so consistently or effectively. As suggested earlier, the influences of American culture are evident just about everywhere, and Coca-cola has somehow come to represent a vision of the US that much of the rest of the world dreams about and aspires for. Perhaps drinking Coke brings people that little bit closer to the dream.

According to the passage, all of the following are not true, except:-

- At least one of the ingredients of Coke is addictive
- The stimulating effect of caffeine is reduced over time unless consumption of it is increased
- The Coca-cola company has gradually increased the amount of caffeine in Coke
- Cocaine and caffeine are addictive substances

32 of 100

103 PU_2016_MBA_E

Direction: For the following question, a part or the whole of the original sentence has been underlined. Find out the best way of writing the underlined part of the sentence.

In the past several years, astronomers have detected more than 80 massive planets, most of them as large or larger than Jupiter, which circle other stars.

- most of them as large or larger than Jupiter, which circle
- most of them at least as large as Jupiter, circling
- mostly at least as large as Jupiter, which circle
- most of them as large or larger than Jupiter and circling

33 of 100

140 PU_2016_MBA_E

In the sequence of numbers: $2/3$, $4/7$, x , $11/21$, $16/31$. The missing number x is:-

- $5/10$
- $6/10$
- $7/13$
- $8/10$

34 of 100

149 PU_2016_MBA_E

A sum of money doubles itself in 12 years. Find the percentage rate per annum?

- 8.33%
- 12.5%

- 10%
- 7.51%

35 of 100

125 PU_2016_MBA_E

Direction: Read the following passage and answer the question that follow.

One of the most successful commercial products ever launched is said to have come about as the result of a mistake. In 1896, Jacob's pharmacy in Atlanta, Georgia in the US, was selling a nerve tonic known as 'French Wine Cola - Ideal Nerve Tonic'. By accidentally adding fizzy water instead of still water to the recipe, a pharmacist called John S. Pemberton invented what has today become the most popular soft drink in the world: Coca-cola. What could possibly account for the amazing success of Coca-Cola? How has this combination of carbonated water, sugar, acid and flavourings come to symbolize the American way of life for most of the world? After all, even the manufacturers could hardly describe Coke as a healthy product since it contains relatively high amount of sugar and phosphoric acid, both of which are known to damage teeth.

One explanation may be found in the name. The original recipe included a flavouring from the coca plant and probably included small amounts of cocaine (an addictive substance), but since the early part of this century, all traces of cocaine have been removed. However, Coke also includes a flavouring from the cola tree; cola extract contains caffeine, which is a stimulant, and the Coca-Cola company adds extra caffeine for good measure. While caffeine is not thought to be an addictive substance in itself, there is considerable evidence that over a period of time, the consumption of caffeine has to be increased in order for its stimulating effect to be maintained, and so sales of Coke perhaps benefit as a result.

A more likely reason for the enduring popularity of Coke may, however, be found in the company's enviable marketing strategies. Over the years, it has come up with some of the most memorable ads, tunes, slogans and sponsorships in the world of advertising, emphasizing international harmony, youthfulness and a carefree lifestyle. Few other companies (arguably including Pepsi, the chief competitor to Coca-Cola) have been able to match such marketing ploys so consistently or effectively. As suggested earlier, the influences of American culture are evident just about everywhere, and Coca-cola has somehow come to represent a vision of the US that much of the rest of the world dreams about and aspires for. Perhaps drinking Coke brings people that little bit closer to the dream.

According to the passage, the author uses 'for good measure' to emphasize the fact that:-

- the extra caffeine is healthy for the drinkers of Coke
- the extra caffeine improves the taste of Coke
- there is a lot of caffeine in Coke
- the amount of caffeine in Coke is carefully measured

36 of 100

106 PU_2016_MBA_E

Direction: For the following question, a part or the whole of the original sentence has been underlined. Find out the best way of writing the underlined part of the sentence.

In quick time, she got acquainted with the new environment.

- On time
- In small time
- In enough time

- In no time

37 of 100

144 PU_2016_MBA_E

Anita had to do a multiplication. Instead of taking 35 as one of the multipliers, she took 53. As a result, the product went up by 540. What is the new product?

- 1050
 1440
 1590
 540

38 of 100

108 PU_2016_MBA_E

Direction: For the following question, a part or the whole of the original sentence has been underlined. Find out the best way of writing the underlined part of the sentence.

The relationship we have with our clients are the cornerstone of our future.

- all clients are
 our clients is
 our client are
 each client is

39 of 100

207 PU_2016_MBA_E

If NUMERICAL is written as MVLQJBBK, then how would ASTROLOGY be written in this code?

- ZTSSNMNHX
 BRSSKNHX
 ZTUSPMPEZ
 BRSTMNHX

40 of 100

180 PU_2016_MBA_E

Direction: Read the following paragraph and answer the question given below.

Three friends A, B and C respectively have Rs. 160, Rs. 120 and Rs. 80. They started playing a game in which the person who has the maximum money gives to both the persons an amount equal to half the difference between his amount and the respective person's amount. The game stops when the difference between the amounts of any two of them has, is less than Rs.5.

What would be the amount with A at the end of the game?

- 117.5
 120
 122.5
 125

41 of 100

104 PU_2016_MBA_E

Direction: For the following question, a part or the whole of the original sentence has been underlined. Find out the best way of writing the underlined part of the sentence.

The modern rise of mobile, social, and location-based technologies has allowed humans to become more tech-savvy now than at any time in their history.

- more tech-savvy now than at any time in their
- more tech-savvy than they were at any time in their
- more tech-savvy than those at any other time in their
- more tech-savvy than those at any other time in

42 of 100

120 PU_2016_MBA_E

Direction: Read the following passage and answer the question that follow.

What is immediately needed today is the establishment of a World Government or an International Federation of Mankind. It is the utmost necessity of the world today, and all those persons who wish to see all human beings happy and prosperous naturally feel it keenly. Of course, at times, we all feel that many of our problems of our political, social and cultural life would come to an end if there were one Government all over the world. Travelers, businessmen, seekers of knowledge and teachers of righteousness know very well that great impediments and obstructions are faced by them when they pass from one country to another, exchange goods, get information, and make an effort to spread their good gospel among their fellow-men.

In the past, religious sects divided one set of people against another, colour of the skin or construction of the body set one against the other. But today when philosophical light has exploded the darkness that was created by religious differences, and when scientific knowledge has falsified the theory of social superiority and when modern inventions have enabled human beings of all religious views and of all races and colours to come in frequent contact with one another, it is the governments of various countries that keep people of one country apart from those of another. They create artificial barriers, unnatural distinctions, unhealthy isolation, unnecessary fears and dangers in the minds of the common men who by their nature want to live in friendship with their fellow-men. But all these evils would cease to exist if there were one Government all over the world.

What is the urgent need of the world today?

- The creation of a cultured international social order
- The establishment of an international economic order
- The establishment of one government
- The development of healthy relations among the various countries of the world

43 of 100

203 PU_2016_MBA_E

Direction: Find the missing number in the given series.

3, 1.5, 1.5, 2.25, 4.5,

- 7.5
- 9.25

- 11.25
- 13.75

44 of 100

201 PU_2016_MBA_E

Direction: Find the missing number in the given series.

1, 3, 7, 15, 31, 63, 127,

- 150
- 250
- 225
- 255

45 of 100

164 PU_2016_MBA_E

In a poll of 66000 physicians, only 20% responded; of these 10% disclosed their preference for pain reliever X. How many of the physicians who responded did not disclose a preference for pain reliever X?

- 11880
- 5280
- 1320
- 10560

46 of 100

142 PU_2016_MBA_E

On January 12, 1980, it was a Saturday. The day of the week on January 12, 1979 was:-

- Thursday
- Sunday
- Friday
- Saturday

47 of 100

208 PU_2016_MBA_E

If IMPORT is written as USPQNJ, then how will CAPITAL be written in this code?

- MBUJQBD
- MBQJUBD
- MUBJBDQ
- KZSHOZB

48 of 100

128 PU_2016_MBA_E

Direction: Read the following passage and answer the question that follow.

One of the most successful commercial products ever launched is said to have come about as the result

of a mistake. In 1896, Jacob's pharmacy in Atlanta, Georgia in the US, was selling a nerve tonic known as 'French Wine Cola - Ideal Nerve Tonic'. By accidentally adding fizzy water instead of still water to the recipe, a pharmacist called John S. Pemberton invented what has today become the most popular soft drink in the world: Coca-cola. What could possibly account for the amazing success of Coca-Cola? How has this combination of carbonated water, sugar, acid and flavourings come to symbolize the American way of life for most of the world? After all, even the manufacturers could hardly describe Coke as a healthy product since it contains relatively high amount of sugar and phosphoric acid, both of which are known to damage teeth.

One explanation may be found in the name. The original recipe included a flavouring from the coca plant and probably included small amounts of cocaine (an addictive substance), but since the early part of this century, all traces of cocaine have been removed. However, Coke also includes a flavouring from the cola tree; cola extract contains caffeine, which is a stimulant, and the Coca-Cola company adds extra caffeine for good measure. While caffeine is not thought to be an addictive substance in itself, there is considerable evidence that over a period of time, the consumption of caffeine has to be increased in order for its stimulating effect to be maintained, and so sales of Coke perhaps benefit as a result.

A more likely reason for the enduring popularity of Coke may, however, be found in the company's enviable marketing strategies. Over the years, it has come up with some of the most memorable ads, tunes, slogans and sponsorships in the world of advertising, emphasizing international harmony, youthfulness and a carefree lifestyle. Few other companies (arguably including Pepsi, the chief competitor to Coca-Cola) have been able to match such marketing ploys so consistently or effectively. As suggested earlier, the influences of American culture are evident just about everywhere, and Coca-cola has somehow come to represent a vision of the US that much of the rest of the world dreams about and aspires for. Perhaps drinking Coke brings people that little bit closer to the dream.

It can be inferred from the last sentence of the passage that:-

- drinking Coke is part of the American dream
- many people wish for a lifestyle like they imagine most Americans have
- most people would like to settle down in America
- drinking Coke reminds a lot of people of visiting America

49 of 100

123 PU_2016_MBA_E

Direction: Read the following passage and answer the question that follow.

What is immediately needed today is the establishment of a World Government or an International Federation of Mankind. It is the utmost necessity of the world today, and all those persons who wish to see all human beings happy and prosperous naturally feel it keenly. Of course, at times, we all feel that many of our problems of our political, social and cultural life would come to an end if there were one Government all over the world. Travelers, businessmen, seekers of knowledge and teachers of righteousness know very well that great impediments and obstructions are faced by them when they pass from one country to another, exchange goods, get information, and make an effort to spread their good gospel among their fellow-men.

In the past, religious sects divided one set of people against another, colour of the skin or construction of the body set one against the other. But today when philosophical light has exploded the darkness that was created by religious differences, and when scientific knowledge has falsified the theory of social superiority and when modern inventions have enabled human beings of all religious views and of all races and colours to come in frequent contact with one another, it is the governments of various countries that keep people of one country apart from those of another. They create artificial barriers, unnatural distinctions, unhealthy isolation, unnecessary fears and dangers in the minds of the common men who by their nature want to live in friendship with their fellow-men. But all these evils would cease to exist if there were one Government all over the world.

The people who face impediments and obstructions when they pass from one country to another are all the following except:-

- Those who spread the good word
- Those who create national barriers
- Traders of goods
- Those who seek knowledge

50 of 100

147 PU_2016_MBA_E

The least number of 4 digits which is a perfect a square is _____.

- 1012
- 1040
- 1064
- 1024

51 of 100

187 PU_2016_MBA_E

Direction: Consider the information given in the question and choose the right answer.

All offices are papers. All papers are birds.

I . All offices are birds.

II. All birds are offices.

- if only conclusion I necessarily follows.
- if both conclusions I & II necessarily follow.
- if neither conclusion I nor II necessarily follow.
- if only conclusion II necessarily follows.

52 of 100

107 PU_2016_MBA_E

Direction: For the following question, a part or the whole of the original sentence has been underlined. Find out the best way of writing the underlined part of the sentence.

Modern ideas of governance started back to the time when people began to question the kings.

- date back to
- start back to
- set back to
- started when

53 of 100

167 PU_2016_MBA_E

There are 361 doctors and nurses in a hospital. If the ratio of doctors to nurses is 8 to 11, how many nurses are there in the hospital?

- 209
- 57
- 171
- 152

54 of 100

161 PU_2016_MBA_E

Find the wrong number in the following series: 2, 3, 6, 15, 45, 156.5, 630.

- 6
- 3
- 156.5
- 45

55 of 100

188 PU_2016_MBA_E

Direction: Consider the information given in the question and choose the right answer.

Some men are parrots. Ramu is a parrot.

- I. Ramu is a man
- II. Some parrots are men

- if only conclusion I necessarily follows.
- if both conclusions I & II necessarily follow.
- if only conclusion II necessarily follows.
- if neither conclusion I nor II necessarily follow.

56 of 100

102 PU_2016_MBA_E

Direction: For the following question, a part or the whole of the original sentence has been underlined. Find out the best way of writing the underlined part of the sentence.

It was nearly impossible to diagnose the girl's illness even after three hospitalizations, several months of therapy, and a near mental breakdown because no one medical professional, neither her therapist nor her doctor were able to see the full scope of her symptoms.

- neither her therapist nor her doctor were able to see
- including her therapist and her doctor were able to see
- neither her therapist nor her doctor could able to see
- not even her therapist nor her doctor was able to see

57 of 100

121 PU_2016_MBA_E

Direction: Read the following passage and answer the question that follow.

What is immediately needed today is the establishment of a World Government or an International Federation of Mankind. It is the utmost necessity of the world today, and all those persons who wish to see all human beings happy and prosperous naturally feel it keenly. Of course, at times, we all feel that many of our problems of our political, social and cultural life would come to an end if there were one Government all over the world. Travelers, businessmen, seekers of knowledge and teachers of righteousness know very well that great impediments and obstructions are faced by them when they pass from one country to another, exchange goods, get information, and make an effort to spread their good gospel among their fellow-men.

In the past, religious sects divided one set of people against another, colour of the skin or construction of the body set one against the other. But today when philosophical light has exploded the darkness that was created by religious differences, and when scientific knowledge has falsified the theory of social superiority and when modern inventions have enabled human beings of all religious views and of all races and colours to come in frequent contact with one another, it is the governments of various countries that keep people of one country apart from those of another. They create artificial barriers, unnatural distinctions, unhealthy isolation, unnecessary fears and dangers in the minds of the common men who by their nature want to live in friendship with their fellow-men. But all these evils would cease to exist if there were one Government all over the world.

The theory of racial superiority stands falsified today by:-

- Philosophical developments
- Precedence given to physical prowess that some races possess and some lack
- The achievements of some races in every field of life
- Scientific knowledge

58 of 100

148 PU_2016_MBA_E

The highest common factor of 70 and 245 is _____.

- 65
- 35
- 55
- 45

59 of 100

200 PU_2016_MBA_E

Direction: Find the missing number in the given series.

(2,3), (5,7), (11,13), (17,19),

- (23,29)
- (23,25)
- (26,28)
- (22,24)

60 of 100

205 PU_2016_MBA_E

Which of the following letters would come in place of the question mark (?) in the given series?

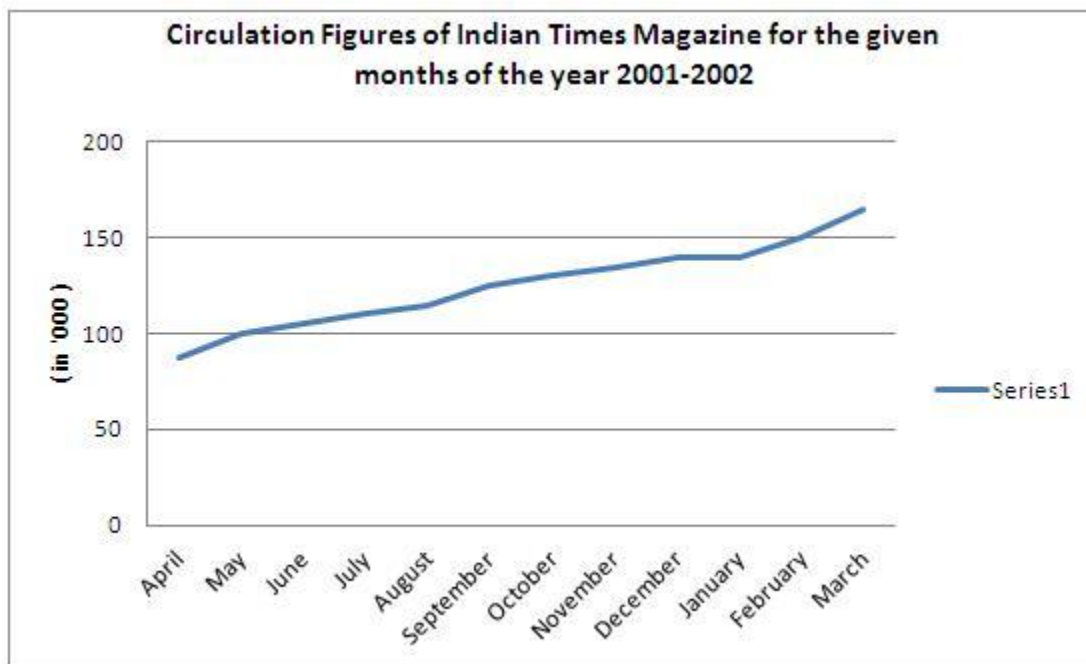
AD, EI, JO, PV, ?

- WD
- VD
- WC
- VE

61 of 100

241 PU_2016_MBA_M

Direction: Answer the question based on the information given in the following graph.
(Assume all values end in 5 or 0)



The least percentage growth in circulation between any two months has been in the month of:-

- September
- August
- May
- January

62 of 100

226 PU_2016_MBA_M

Direction: Read the passage and answer the question that follow:

Price of rice has increased by 10% in the current month from that in the previous month. Present price of salt is Rs.4 per kg. Currently price of pulses is Rs.18 per kg which was Rs.15 per kg in the last month. In the last price of rice was Rs.10 per kg. In the current month price of wheat has increased by 20% but the same for salt has declined by 20% in comparison to the previous month. Rs.5 per kg was the price of wheat in the previous month.

Which of the following is true?

- Total price of 1 kg of each of rice, wheat, and salt remains unchanged
- Total price of rice, wheat, salt, and pulses remains unchanged
- Total price of 1 kg of wheat and 1 kg of salt remains unchanged
- Total price of 1 kg of wheat and 1 kg of salt has changed

63 of 100

222 PU_2016_MBA_M

Direction: Answer the question based on the data given in the following table:

	1996-97	1997-98 (Budget Estimates)	1997-98 (Revised Estimates)	1998-99 (Budget Estimates)
I. Total provision for capital formation	3553	3805	4057	4608
A. Developmental	3524	3747	4007	4542
1. Social services	98	126	126	212
2. Economic services	2454	2481	2764	3034
a. Agriculture	460	121	280	89
b. Industry	1002	1404	1406	1670
c. Transport, etc	678	789	775	970
d. Others	314	267	303	305
3. Block Grants & Loans	972	1040	1117	1296
B. Non-Developmental	29	58	50	66
1. General services	29	58	50	66
2. Non-allocable				
II. Total Development Expenditure	5498	5415	6260	6910

Between 1997-98 and 1998-99 Budget Estimates, the number of items which show more than 25% increase in capital formation is:-

- 1
- 5
- 3
- 7

64 of 100

223 PU_2016_MBA_M

Direction: Answer the question based on the data given in the following table:

	1996-97	1997-98 (Budget Estimates)	1997-98 (Revised Estimates)	1998-99 (Budget Estimates)
I. Total provision for capital formation	3553	3805	4057	4608
A. Developmental	3524	3747	4007	4542
1. Social services	98	126	126	212
2. Economic services	2454	2481	2764	3034
a. Agriculture	460	121	280	89
b. Industry	1002	1404	1406	1670
c. Transport, etc	678	789	775	970
d. Others	314	267	303	305
3. Block Grants & Loans	972	1040	1117	1296
B. Non-Developmental	29	58	50	66
1. General services	29	58	50	66
2. Non-allocable				
II. Total Development Expenditure	5498	5415	6260	6910

The item whose budget and revised estimates of 1997-98 show little variation is:-

- Transport and so on
- Industry
- General services
- Social services

65 of 100

225 PU_2016_MBA_M

Direction: Read the passage and answer the question that follow:

Price of rice has increased by 10% in the current month from that in the previous month. Present price of salt is Rs.4 per kg. Currently price of pulses is Rs.18 per kg which was Rs.15 per kg in the last month. In the last price of rice was Rs.10 per kg. In the current month price of wheat has increased by 20% but the same for salt has declined by 20% in comparison to the previous month. Rs.5 per kg was the price of wheat in the previous month.

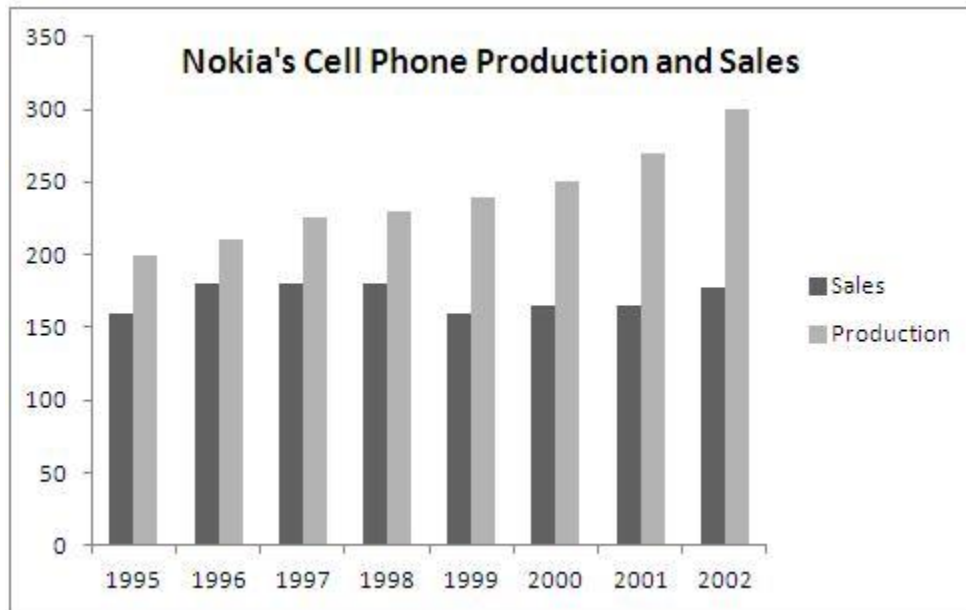
Price of pulse has increased in the current month by:-

- 20%
- 30%
- 22.5%
- 15%

66 of 100

247 PU_2016_MBA_M

Direction: Based on the figures in the bar chart, answer the following question. (Assume all numbers in the bar graph in ten thousands).



What percentage of the total production has been sold during the year 1999?

- 75%
- More than 75%
- Less than 70%
- 80%

67 of 100

227 PU_2016_MBA_M

Direction: Read the passage and answer the question that follow:

Price of rice has increased by 10% in the current month from that in the previous month. Present price of salt is Rs.4 per kg. Currently price of pulses is Rs.18 per kg which was Rs.15 per kg in the last month. In the last price of rice was Rs.10 per kg. In the current month price of wheat has increased by 20% but the same for salt has declined by 20% in comparison to the previous month. Rs.5 per kg was the price of wheat in the previous month.

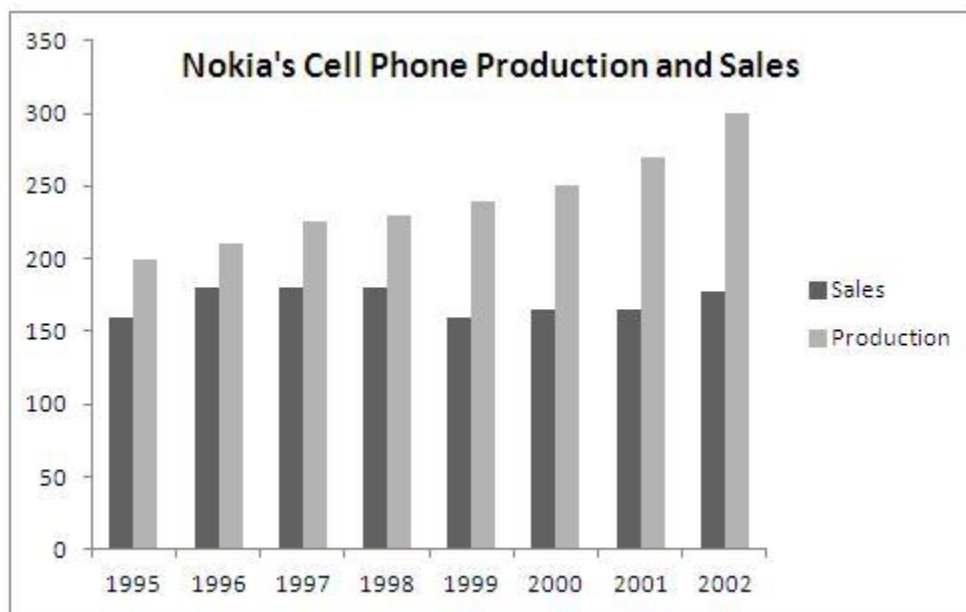
In terms of absolute value, maximum increase in cost per kg was observed for:-

- Pulses
- Wheat
- Salt
- Rice

68 of 100

249 PU_2016_MBA_M

Direction: Based on the figures in the bar chart, answer the following question. (Assume all numbers in the bar graph in ten thousands).



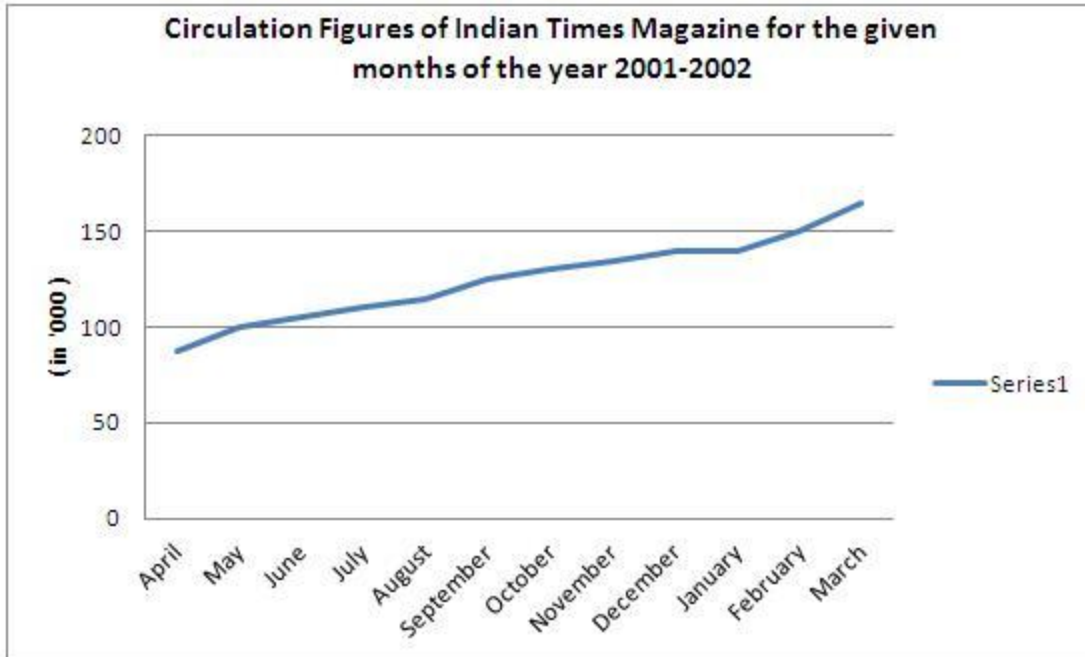
In which of the following years has the sale of cell phones shown negative trend?

- 2001
- 1999
- 1998
- 2000

69 of 100

240 PU_2016_MBA_M

Direction: Answer the question based on the information given in the following graph. (Assume all values end in 5 or 0)



The percentage growth in monthly circulation between April 2001 and March 2002 has been closest to:-

- 83.33%
- 77.77%
- 80%
- 55.55%

70 of 100

224 PU_2016_MBA_M

Direction: Answer the question based on the data given in the following table:

	1996-97	1997-98 (Budget Estimates)	1997-98 (Revised Estimates)	1998-99 (Budget Estimates)
I. Total provision for capital formation	3553	3805	4057	4608
A. Developmental	3524	3747	4007	4542
1. Social services	98	126	126	212
2. Economic services	2454	2481	2764	3034
a. Agriculture	460	121	280	89
b. Industry	1002	1404	1406	1670
c. Transport, etc	678	789	775	970
d. Others	314	267	303	305
3. Block Grants & Loans	972	1040	1117	1296
B. Non-Developmental	29	58	50	66
1. General services	29	58	50	66
2. Non-allocable				
II. Total Development Expenditure	5498	5415	6260	6910

The item showing a negative variation between 1997-98 (Revised) and 1998-99 (Budget) is:-

- Total developmental expenditure
- Agriculture
- Others
- General services

71 of 100

220 PU_2016_MBA_M

Direction: Answer the question based on the data given in the following table:

	1996-97	1997-98 (Budget Estimates)	1997-98 (Revised Estimates)	1998-99 (Budget Estimates)
I. Total provision for capital formation	3553	3805	4057	4608
A. Developmental	3524	3747	4007	4542
1. Social services	98	126	126	212
2. Economic services	2454	2481	2764	3034
a. Agriculture	460	121	280	89
b. Industry	1002	1404	1406	1670
c. Transport, etc	678	789	775	970
d. Others	314	267	303	305
3. Block Grants & Loans	972	1040	1117	1296
B. Non-Developmental	29	58	50	66
1. General services	29	58	50	66
2. Non-allocable				
II. Total Development Expenditure	5498	5415	6260	6910

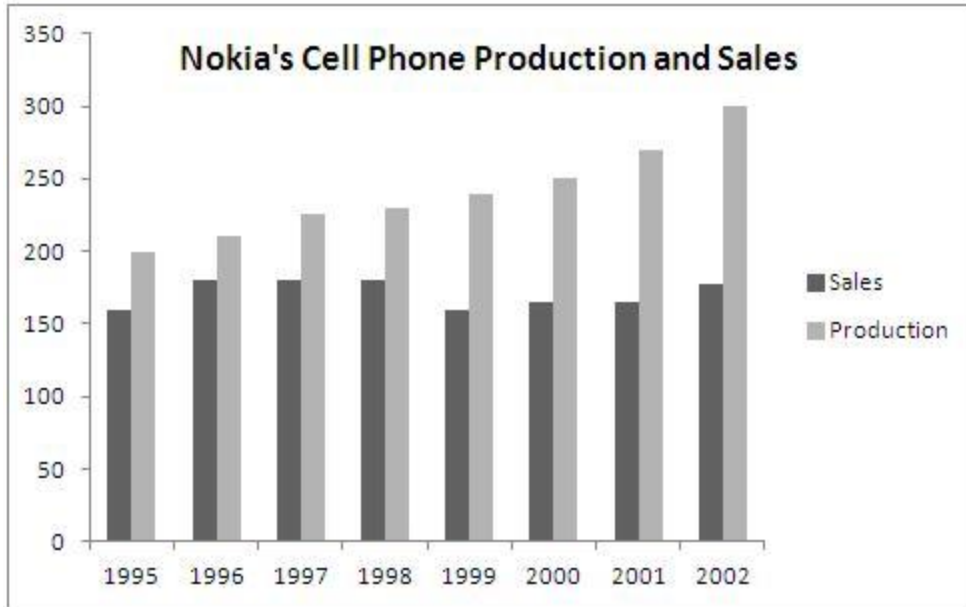
Between first and last periods, the number of items showing a decline in capital formation is:-

- 5
- 1
- Agriculture, others
- 9

72 of 100

246 PU_2016_MBA_M

Direction: Based on the figures in the bar chart, answer the following question. (Assume all numbers in the bar graph in ten thousands).



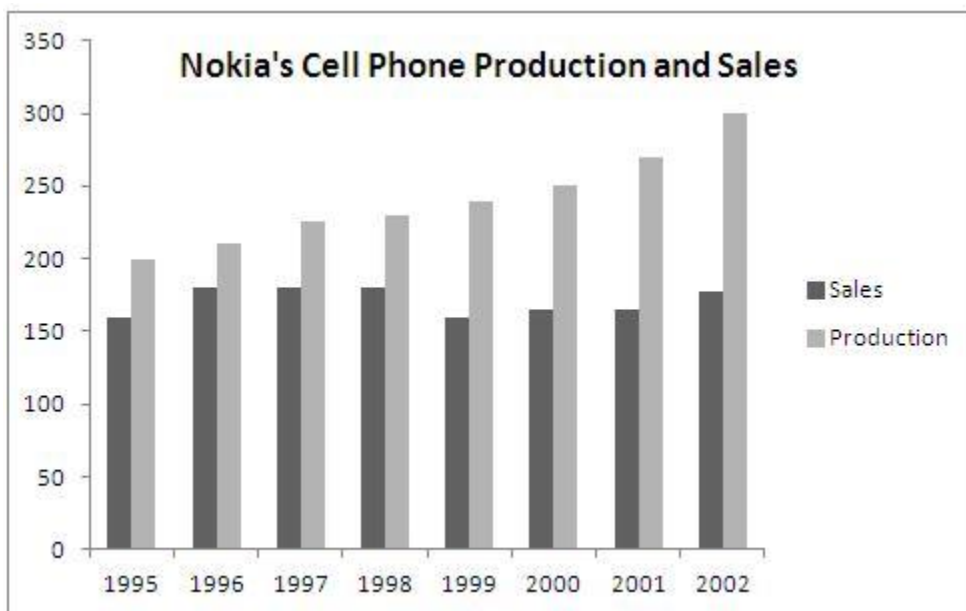
What is the percentage increase in sales between 1995 and 2002?

- More than 40%
- 45%
- Less than 20 %
- 25%

73 of 100

248 PU_2016_MBA_M

Direction: Based on the figures in the bar chart, answer the following question. (Assume all numbers in the bar graph in ten thousands).



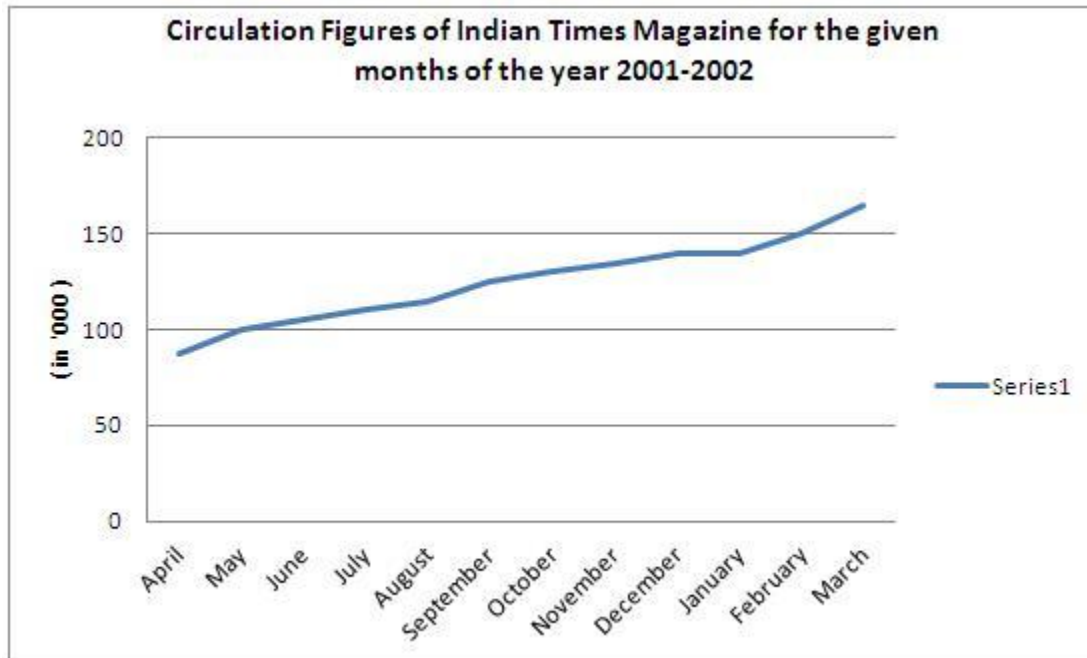
The year in which there was the maximum percentage in production was:-

- 2001
- 2000
- 2002
- 1999

74 of 100

244 PU_2016_MBA_M

Direction: Answer the question based on the information given in the following graph.
(Assume all values end in 5 or 0)



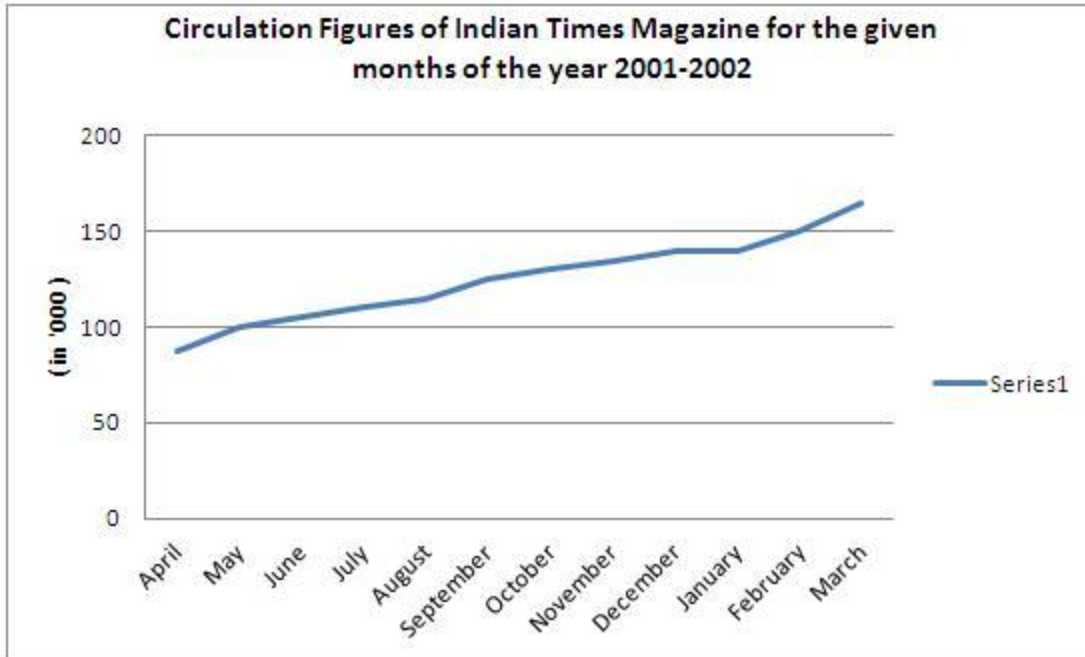
The average monthly circulation during October-March exceeds the average monthly circulation during April-September (in'000)?

- 35
- 45
- 40.2
- 41.6

75 of 100

243 PU_2016_MBA_M

Direction: Answer the question based on the information given in the following graph.
(Assume all values end in 5 or 0)



What is the average monthly circulation (in '000s) of the magazine for the year 2001- 2002? (approximately)

- 115
- 150
- 135
- 125

76 of 100

221 PU_2016_MBA_M

Direction: Answer the question based on the data given in the following table:

	1996-97	1997-98 (Budget Estimates)	1997-98 (Revised Estimates)	1998-99 (Budget Estimates)
I. Total provision for capital formation	3553	3805	4057	4608
A. Developmental	3524	3747	4007	4542
1. Social services	98	126	126	212
2. Economic services	2454	2481	2764	3034
a. Agriculture	460	121	280	89
b. Industry	1002	1404	1406	1670
c. Transport, etc	678	789	775	970
d. Others	314	267	303	305
3. Block Grants & Loans	972	1040	1117	1296
B. Non-Developmental	29	58	50	66
1. General services	29	58	50	66
2. Non-allocable				
II. Total Development Expenditure	5498	5415	6260	6910

The item/sub item that shows the least percentage variation between 1996-97 (Accounts) and 1997-98 (Revised Estimation) is:-

- Others
- Transport and so on
- Social services
- General services

77 of 100

229 PU_2016_MBA_M

Direction: Read the passage and answer the question that follow:

Price of rice has increased by 10% in the current month from that in the previous month. Present price of salt is Rs.4 per kg. Currently price of pulses is Rs.18 per kg which was Rs.15 per kg in the last month. In the last price of rice was Rs.10 per kg. In the current month price of wheat has increased by 20% but the same for salt has declined by 20% in comparison to the previous month. Rs.5 per kg was the price of wheat in the previous month.

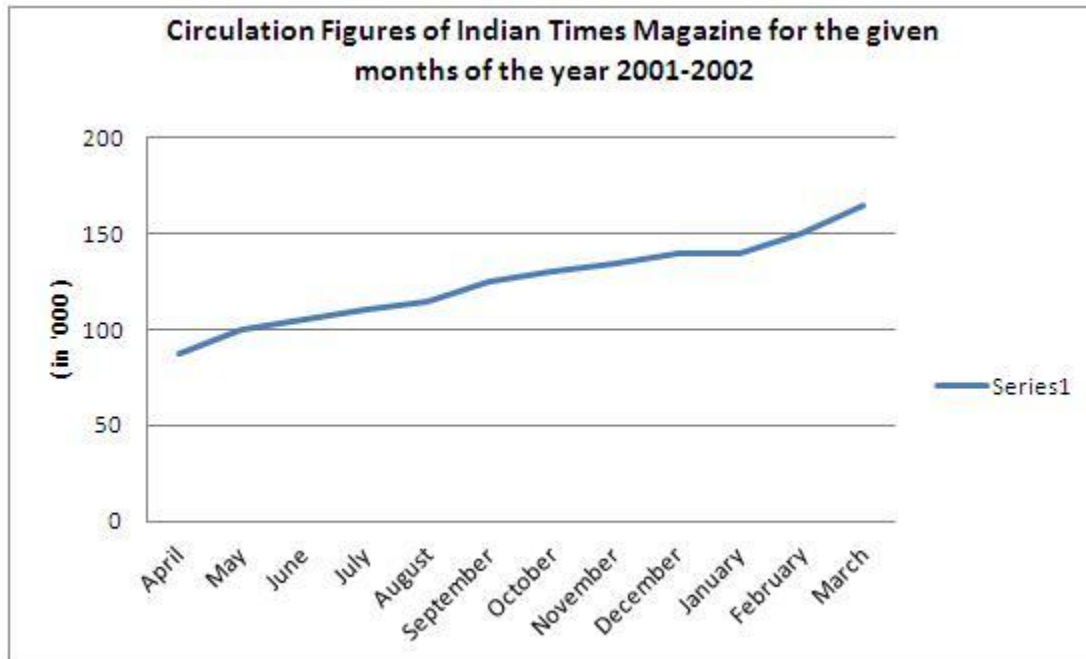
Overall increase in price of the four commodities taken together is:-

- 10%
- 7.5%
- 11.43%
- 30%

78 of 100

242 PU_2016_MBA_M

Direction: Answer the question based on the information given in the following graph.
(Assume all values end in 5 or 0)



How many different figures (values) of circulation does the above graph give?

- Eleven
- Twelve
- Nine
- Ten

79 of 100

228 PU_2016_MBA_M

Direction: Read the passage and answer the question that follow:

Price of rice has increased by 10% in the current month from that in the previous month. Present price of salt is Rs.4 per kg. Currently price of pulses is Rs.18 per kg which was Rs.15 per kg in the last month. In the last price of rice was Rs.10 per kg. In the current month price of wheat has increased by 20% but the same for salt has declined by 20% in comparison to the previous month. Rs.5 per kg was the price of wheat in the previous month.

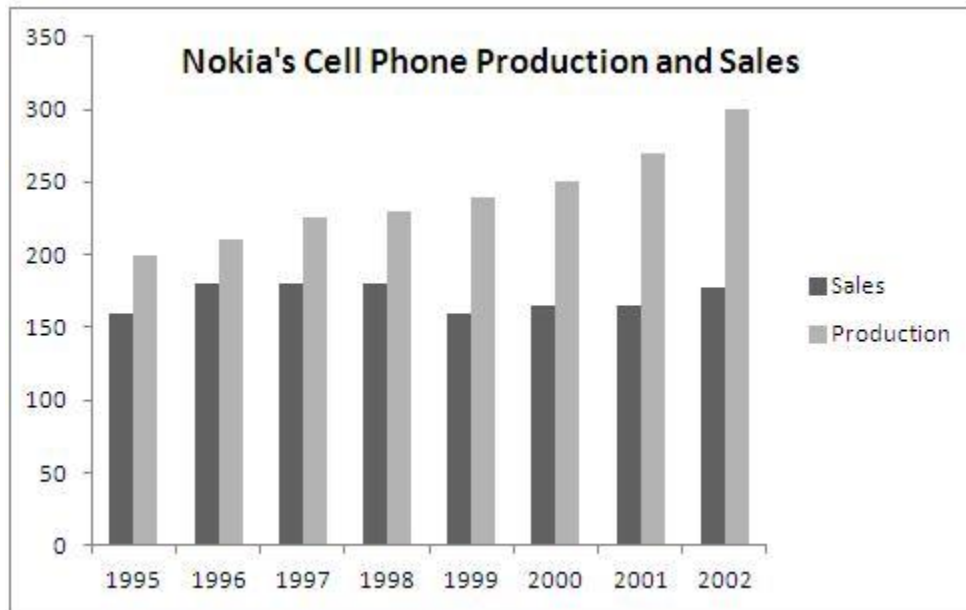
Previous price of salt was what per cent of the current price of the commodity?

- 125%
- 20%
- 80%
- 40%

80 of 100

245 PU_2016_MBA_M

Direction: Based on the figures in the bar chart, answer the following question. (Assume all numbers in the bar graph in ten thousands).



The sales of cell phones for 1999 are:-

- 16,00,000
- 2,00,000
- 16000
- 1,60,000

81 of 100

282 PU_2016_MBA_D

The terms '**Bull**' and '**Bear**' are used in:-

- Stock Exchange
- Income Tax Department
- Forest
- Planning Commission

82 of 100

263 PU_2016_MBA_D

Which of the following roads in Delhi is renamed as Abdul Kalam Road recently?

- Aurangzeb Road
- Akbar Road
- Lodhi Road

- Safdarjung Road

83 of 100

268 PU_2016_MBA_D

Apurvi Singh Chandela, Who qualified for 2016 Olympics is associated with which sport?

- Athletics
- Shooting
- Archery
- Table Tennis

84 of 100

264 PU_2016_MBA_D

Similar to 911 of United states and 999 of United Kingdom, which of the following number, Government of India has recently approved as National Emergency telephone Number?

- 112
- 111
- 108
- 101

85 of 100

269 PU_2016_MBA_D

Which is India's oldest paramilitary force?

- Indian Coast Guard
- Border Security Force
- Assam Rifles
- Special Frontier Force

86 of 100

287 PU_2016_MBA_D

'Kings are made for public, public is not made for king' - Who made this statement during the freedom movement of India?

- Dadabhai Nauroji
- Abbas Tyabji
- Mahatma Gandhi
- Maulana Abdul Kalam Azad

87 of 100

283 PU_2016_MBA_D

The corporate head quarters of Tata Group is:-

- Tata Towers
- JRD Center

- Bombay House
- Jamshedji Palace

88 of 100

261 PU_2016_MBA_D

Who among the following was recently conferred the Skoch Lifetime Achievement Award for Contribution to Inclusive Growth and Poverty Alleviation in India?

- M.Venkaiah Naidu
- Anna Hazare
- Venkat Akula
- Karan Singh

89 of 100

280 PU_2016_MBA_D

<http://www.examination.com> - It is an example of:-

- URL
- HTML
- AML
- LAN

90 of 100

285 PU_2016_MBA_D

Arranging data in a logical sequence is called:-

- sorting
- summarizing
- reproducing
- classification

91 of 100

262 PU_2016_MBA_D

Dadasaheb Phalke Award for the year 2015 was conferred on:-

- Rajini Kant
- Dilip Kumar
- Manoj Kumar
- Amitab Bachan

92 of 100

266 PU_2016_MBA_D

MS Word is an example of _____.

- Operating System

- Translating Software
- System Software
- Application Software

93 of 100

284 PU_2016_MBA_D

Which two institutions are popularly referred to as the '**Bretton Wood Twins**'?

- Monetary Fund and World Bank
- World Bank and Asian Development Bank
- WTO and United Nations Organization
- IMF and Asian Development Bank

94 of 100

265 PU_2016_MBA_D

To present personal grievances on web is known as:-

- cyber-venting
- web-plea
- cyber-rating
- web-hate

95 of 100

267 PU_2016_MBA_D

Which of the following Indian Banks was recently given permission to operate in Myanmar by Myanmar Government?

- IDBI Bank
- Axis Bank
- NABARD
- State Bank of India

96 of 100

288 PU_2016_MBA_D

Which company's mobile phones are marketed with the slogan - '**Big inside, small outside**'?

- Sony
- Apple
- Samsung
- Micromax

97 of 100

289 PU_2016_MBA_D

US coffee chain giant Starbucks with collaboration of Tata Global Beverages (TGBL) has opened their India's first Starbucks coffee outlet in which city in October 2012?

- Bangaluru
- Hyderabad
- New Delhi
- Mumbai

98 of 100

286 PU_2016_MBA_D

Which of the following US city is called '**City of Golden Gate**'?

- San Francisco
- Chicago
- Los Angeles
- New York

99 of 100

260 PU_2016_MBA_D

Which of the following environmentalists first gave the concept of '**BIO-DIVERSITY HOTSPOTS**'?

- Norman Myers
- Julia Butterfly Hill
- John Muir
- Gaylord Nelson

100 of 100

281 PU_2016_MBA_D

'Benchmark' means:-

- Set standards
- Mark on a bench
- Product lined up on a bench
- Salesman sitting on a bench