

Sr No.	MBA Common Paper
1	<p>Directions : Read the following Passage and answer the question that follow.</p> <p>At this stage of civilisation, when many nations are brought in to close and vital contact for good and evil, it is essential, as never before, that their gross ignorance of one another should be diminished, that they should begin to understand a little of one another's historical experience and resulting mentality. It is the fault of the English to expect the people of other countries to react as they do, to political and international situations. Our genuine goodwill and good intentions are often brought to nothing, because we expect other people to be like us. This would be corrected if we knew the history, not necessarily in detail but in broad outlines, of the social and political conditions which have given to each nation its present character.</p> <p>According to the author of 'Mentality' of a nation is mainly product of its.....</p>
Alt1	present character
Alt2	international position
Alt3	politics
Alt4	history

2	<p>Directions : Read the following Passage and answer the question that follow.</p> <p>At this stage of civilisation, when many nations are brought in to close and vital contact for good and evil, it is essential, as never before, that their gross ignorance of one another should be diminished, that they should begin to understand a little of one another's historical experience and resulting mentality. It is the fault of the English to expect the people of other countries to react as they do, to political and international situations. Our genuine goodwill and good intentions are often brought to nothing, because we expect other people to be like us. This would be corrected if we knew the history, not necessarily in detail but in broad outlines, of the social and political conditions which have given to each nation its present character.</p> <p>The character of a nation is the result of its.....</p>
Alt1	gross ignorance
Alt2	cultural heritage
Alt3	socio-political conditions
Alt4	mentality

3	<p>Directions : Read the following Passage and answer the question that follow.</p> <p>At this stage of civilisation, when many nations are brought in to close and vital contact for good and evil, it is essential, as never before, that their gross ignorance of one another should be diminished, that they should begin to understand a little of one another's historical experience and resulting mentality. It is the fault of the English to expect the people of other countries to react as they do, to political and international situations. Our genuine goodwill and good intentions are often brought to nothing, because we expect other people to be like us. This would be corrected if we knew the history, not necessarily in detail but in broad outlines, of the social and political conditions which have given to each nation its present character.</p> <p>The need for a greater understanding between nations.....</p>
Alt1	is more today than ever before
Alt2	was always there
Alt3	is no longer there
Alt4	will always be there

4	<p>Directions : Read the following Passage and answer the question that follow.</p> <p>At this stage of civilisation, when many nations are brought in to close and vital contact for good and evil, it is essential, as never before, that their gross ignorance of one another should be diminished, that they should begin to understand a little of one another's historical experience and resulting mentality. It is the fault of the English to expect the people of other countries to react as they do, to political and international situations. Our genuine goodwill and good intentions are often brought to nothing, because we expect other people to be like us. This would be corrected if we knew the history, not necessarily in detail but in broad outlines, of the social and political conditions which have given to each nation its present character.</p> <p>Englishmen like others to react to political situations like.....</p>
Alt1	others
Alt2	us
Alt3	themselves
Alt4	each other's

5	<p>Directions : Read the following Passage and answer the question that follow.</p> <p>At this stage of civilisation, when many nations are brought in to close and vital contact for good and evil, it is essential, as never before, that their gross ignorance of one another should be diminished, that they should begin to understand a little of one another's historical experience and resulting mentality. It is the fault of the English to expect the people of other countries to react as they do, to political and international situations. Our genuine goodwill and good intentions are often brought to nothing, because we expect other people to be like us. This would be corrected if we knew the history, not necessarily in detail but in broad outlines, of the social and political conditions which have given to each nation its present character.</p> <p>According to the author his countrymen should.....</p>
Alt1	read the story of other nations
Alt2	not react to other actions
Alt3	have a better understanding of other nations
Alt4	have vital contacts with other nations

6	<p>Direction: In the following question, choose the option that is CLOSEST in meaning to the given word:</p> <p>PROTAGONIST</p>
Alt1	Leading character
Alt2	Explorer
Alt3	Prophet
Alt4	Talented child

7	<p>Direction: In the following question, choose the option that is CLOSEST in meaning to the given word:</p> <p>SERENDIPITY</p>
Alt1	Rationality
Alt2	Astrological
Alt3	Chance
Alt4	Logic

8	<p>Direction: In the following question, choose the word which is the OPPOSITE of the given word.</p> <p>CONCLUSIVE</p>
Alt1	Distinguished
Alt2	Wanting

Alt3	Definitive
Alt4	Singular

9	Direction: In the following question, choose the word which is the OPPOSITE of the given word.  IMPROMPTU
Alt1	Intuitive
Alt2	Deliberate
Alt3	Portent
Alt4	Bucolic

10	Direction: In the following question, choose the word which is the OPPOSITE of the given word.  AUGMENT
Alt1	Increase
Alt2	Diminish
Alt3	Argument
Alt4	Delay

11	Directions: Pick out the most effective word from the given words to fill in the blank to make the sentence meaningfully complete.  Despite _____ laws, poaching of wild animals is still carried out clandestinely in some parts of the country.
Alt1	legal
Alt2	penal
Alt3	stringent
Alt4	imunitive

12	Directions: Pick out the most effective word from the given words to fill in the blank to make the sentence meaningfully complete.  In the modern materialistic society, the only aim of people appears to be..... money by fair means or foul.
Alt1	printing
Alt2	providing
Alt3	acquiring
Alt4	expanding

13	Directions: Pick out the most effective word from the given words to fill in the blank to make the sentence meaningfully complete.  After she had....the disturbing....in the hospital, she could not sleep.
Alt1	Seen/scene
Alt2	Scene/seen
Alt3	Seen/seen
Alt4	Scene/scene

14	Directions: Pick out the most effective word from the given words to fill in the blank to make the sentence meaningfully complete.   A sanguine outlook is associated with the.....
Alt1	rationalist
Alt2	socialist
Alt3	philanthropist
Alt4	optimist

15	Direction: In the following question, choose the option that is CLOSEST in meaning to the given word:   VICARIOUS
Alt1	Surrogate
Alt2	Indirect
Alt3	Atrocious
Alt4	Second-hand

16	Direction: In the following question, choose the word which is the OPPOSITE of the given word.   HISTRIONIC
Alt1	Dramatic
Alt2	Optic
Alt3	Sincere
Alt4	Hermetic

17	Direction: In the following question, choose the word which is the OPPOSITE of the given word.   AFFLUENCE
Alt1	Poverty
Alt2	Affinity
Alt3	Prosperity
Alt4	Influence

18	Direction: In the following question, choose the word which is the OPPOSITE of the given word.   ANTIDOTE
Alt1	Amity
Alt2	Medicine
Alt3	Vaccine

Alt4	Poison
------	--------

19	Direction: In the following question, choose the word which is the OPPOSITE of the given word.   HUMANE
Alt1	Callous
Alt2	Charitable
Alt3	Perturb
Alt4	Philanthropic

20	Direction: In the following question, choose the word which is the OPPOSITE of the given word.   QUELL
Alt1	Subdue
Alt2	Inflame
Alt3	Deflate
Alt4	Allay

21	If 20% of 'a' = 'b', then 'b'% of 20 is the same as:
Alt1	40% of 'a'
Alt2	10% of 'a'
Alt3	4% of 'a'
Alt4	20% of 'a'

22	In an office, there are officers and workers. The average salary of the officers and workers is Rs. 20,250. The average salary of officers alone is Rs. 50,000 and that of workers is Rs. 15,000. If the number of officers are 30, what are the number of workers in the office?
Alt1	120
Alt2	100
Alt3	80
Alt4	70

23	The population of a town increased from 1,75, 000 to 2,62,500 in a decade. The average percent increase of population per year is:
Alt1	4.37%
Alt2	0.05
Alt3	0.06
Alt4	8.75%

24	A rectangular park 60 m long and 40 m wide will be used as a lawn. If the cost for laying the lawn per square meter is Rs. 52.50, then what is cost for laying the lawn?
Alt1	Rs. 1,16,000
Alt2	Rs. 1,26,000

Alt3	Rs. 1,10,000
Alt4	Rs. 1,24,000

25	If '+' means minus, '-' means multiplication, '÷' means plus and 'x' means divided by, then, what is  $10 \times 5 \div 3 - 2 + 3$ equal to
Alt1	5
Alt2	7
Alt3	8/3
Alt4	9

26	What should come in place of '?' in the following series? 13, 35, ?, 299,893,2675,
Alt1	97
Alt2	99
Alt3	101
Alt4	103

27	Samir started a software business by investing Rs. 40,000. After six months, Nitish joined him with a capital of Rs. 60,000. After 3 years, they earned a profit of Rs. 27,900. What was Samir's share in the profit?
Alt1	Rs. 12,400
Alt2	Rs. 13,000
Alt3	Rs. 13,200
Alt4	Rs. 15,000

28	A fruit seller had some apples. He sells 40% apples and still has 420 apples. Originally, how many apples did he have?
Alt1	588
Alt2	600
Alt3	677
Alt4	700

29	3 pumps, working 8 hours a day, can empty a tank in 2 days. How many hours a day should 4 pumps work in order to empty the tank in one day?
Alt1	10
Alt2	12
Alt3	8
Alt4	15

30	There are 400 mangoes. 10% of them were sold and 15% were eaten. How many mangoes are still there?
Alt1	250
Alt2	300

Alt3	350
Alt4	325

31	The square of a number n is less than its 27 times by 180. Which of the following can be the value of 'n'?
Alt1	16
Alt2	17
Alt3	14
Alt4	15

32	Find the last digit of the square number whose seventh part is multiplied by 11th part gives 1,232?
Alt1	8
Alt2	2
Alt3	4
Alt4	6

33	The remainder of $275/7$
Alt1	8
Alt2	1
Alt3	0
Alt4	5

34	The largest four digit number which is also a perfect cube is
Alt1	9999
Alt2	8000
Alt3	9261
Alt4	9099

35	In a G.P the 1st term is 5 and the common ratio is 2. The 8th term is:
Alt1	640
Alt2	1280
Alt3	256
Alt4	160

36	A train passes two bridges of lengths 800 meters and 400 meters in 100 seconds and 60 seconds respectively. The length of the train is ____.
Alt1	90 m
Alt2	80 m
Alt3	200 m
Alt4	150 m

37	The ratio of water and milk in a 30 liter mixture is 7: 3. Find the quantity of water to be added to the mixture in order to make the ratio into 6: 1.
Alt1	32
Alt2	30
Alt3	35
Alt4	33



38	A and B can together do a work in 15 days. B alone can do it in 20 days. In how many days, can A alone do it?
Alt1	30 days
Alt2	45 days
Alt3	60 days
Alt4	40 days

39	A can complete a piece of work in 4 days. B takes double the time taken by A, C takes double that of B, and D takes double that of C to complete the same task. They are paired in groups of two each. One pair takes two-thirds the time needed by the second pair to complete the work. Which is the first pair?
Alt1	A and D
Alt2	A and C
Alt3	A and B
Alt4	B and C

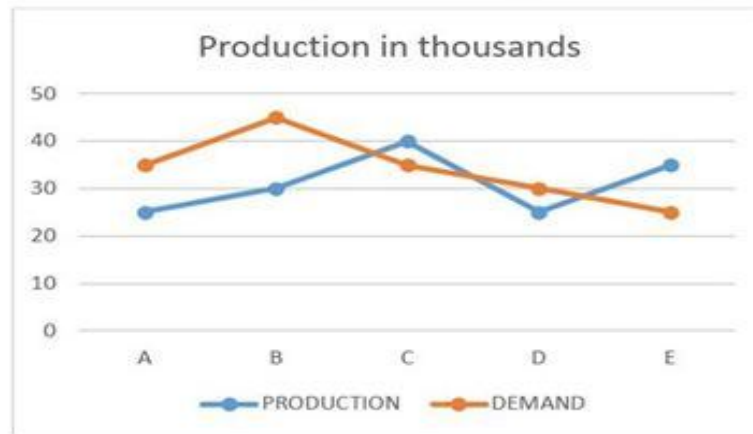
40	A tree 6 meter tall cast a four meter long shadow. At the same time, a flag pole casts a shadow 15 meter long. How long is the flag pole?
Alt1	75 Meter
Alt2	50 Meter
Alt3	150 Meter
Alt4	100 Meter

41	<p>Directions : Study the following line graph carefully and answer the questions accordingly.</p> <p>Following graph gives the demand and production of mobile phones of five companies A, B, C, D and E</p> <div><p>Production in thousands</p><table><thead><tr><th>Company</th><th>Production (thousands)</th><th>Demand (thousands)</th></tr></thead><tbody><tr><td>A</td><td>25</td><td>35</td></tr><tr><td>B</td><td>30</td><td>45</td></tr><tr><td>C</td><td>40</td><td>35</td></tr><tr><td>D</td><td>25</td><td>30</td></tr><tr><td>E</td><td>35</td><td>25</td></tr></tbody></table></div> <p>The production of company B is approximately what percent of the demand?</p>	Company	Production (thousands)	Demand (thousands)	A	25	35	B	30	45	C	40	35	D	25	30	E	35	25
Company	Production (thousands)	Demand (thousands)																	
A	25	35																	
B	30	45																	
C	40	35																	
D	25	30																	
E	35	25																	
Alt1	0.714																		
Alt2	0.85																		
Alt3	1.4																		
Alt4	0.6667																		

42

Directions : Study the following line graph carefully and answer the questions accordingly.

Following graph gives the demand and production of mobile phones of five companies A, B, C, D and E



What is the average production of mobile phones by all the companies?

Alt1 3,100

Alt2 25000

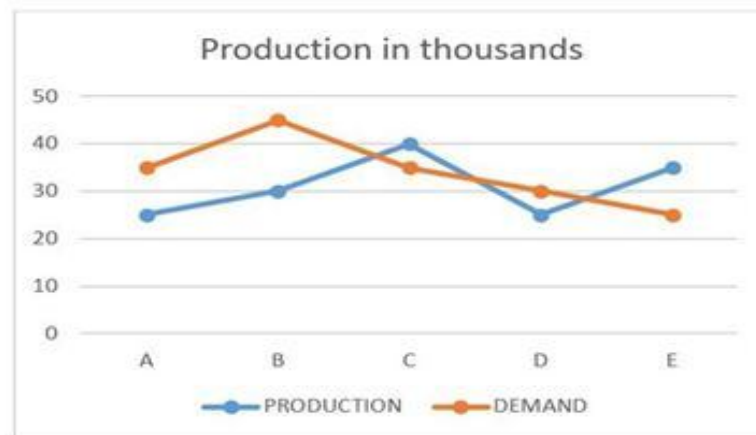
Alt3 26000

Alt4 31000

43

Directions : Study the following line graph carefully and answer the questions accordingly.

Following graph gives the demand and production of mobile phones of five companies A, B, C, D and E



The production of mobile phones by company C is the close to the production of which of the following pairs of the companies?

Alt1 A and D

Alt2 B and E

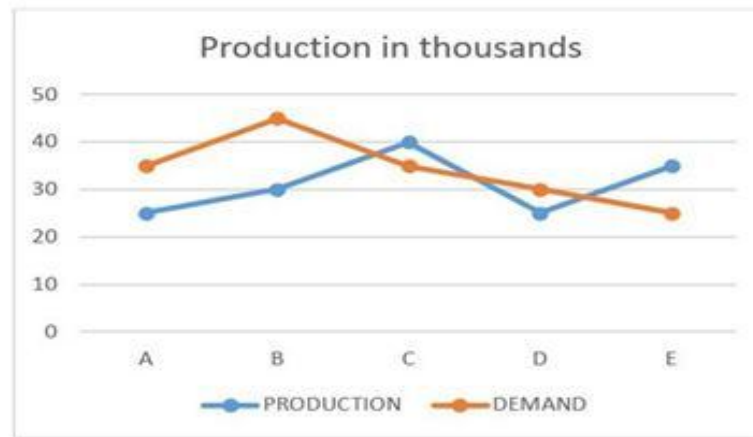
Alt3 D and E

Alt4 B and A

44

Directions : Study the following line graph carefully and answer the questions accordingly.

Following graph gives the demand and production of mobile phones of five companies A, B, C, D and E



The demand of company E is approximately what percent of the demand of company D?

Alt1 30

Alt2 0.65

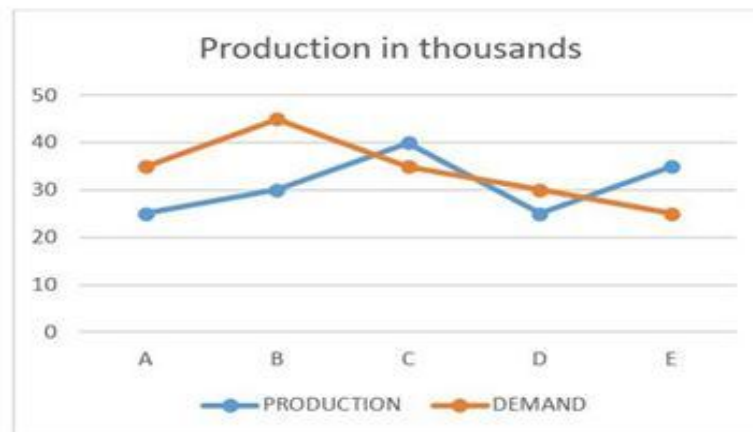
Alt3 0.833

Alt4 0.4

45

Directions : Study the following line graph carefully and answer the questions accordingly.

Following graph gives the demand and production of mobile phones of five companies A, B, C, D and E



The difference between the total demand and production of 5 companies together is

Alt1 25000

Alt2 30000

Alt3 20000

Alt4 45000

46

Study the following table and answer the questions given below:

Name of the food item	No. of units sold in		Sales price/unit (Rs.)
	2001	2002	
Sandwiches	6,000	6,600	10
Salad	5,000	4,800	8
Soups	4,000	4,400	12
Beverages	6,100	6,000	15
Dessert	4,000	4,000	20

The total sale value is maximum for which of the five food items?

Alt1 Sandwiches

Alt2 Beverages

Alt3 Dessert

Alt4 Salad

47

Study the following table and answer the questions given below:

Name of the food item	No. of units sold in		Sales price/unit (Rs.)
	2001	2002	
Sandwiches	6,000	6,600	10
Salad	5,000	4,800	8
Soups	4,000	4,400	12
Beverages	6,100	6,000	15
Dessert	4,000	4,000	20

The most popular items during the two months period is

Alt1 Sandwiches

Alt2 Salad

Alt3 Beverages

Alt4 Dessert

48

Study the following table and answer the questions given below:

Name of the food item	No. of units sold in		Sales price/unit (Rs.)
	2001	2002	
Sandwiches	6,000	6,600	10
Salad	5,000	4,800	8
Soups	4,000	4,400	12
Beverages	6,100	6,000	15
Dessert	4,000	4,000	20

The combined sale of which two food items increased by 10% in 2002 as compared to 2001?

Alt1 Sandwiches and Beverages

Alt2 Sandwiches and Dessert

Alt3 Sandwiches and Soup

Alt4 Soup and Dessert

49

Study the following table and answer the questions given below:

Name of the food item	No. of units sold in		Sales price/unit (Rs.)
	2001	2002	
Sandwiches	6,000	6,600	10
Salad	5,000	4,800	8
Soups	4,000	4,400	12
Beverages	6,100	6,000	15
Dessert	4,000	4,000	20

Which item appears to have constant demand?

Alt1 Sandwiches

Alt2 Salad

Alt3 Soup

Alt4 Dessert

50

Study the following table and answer the questions given below:

Name of the food item	No. of units sold in		Sales price/unit (Rs.)
	2001	2002	
Sandwiches	6,000	6,600	10
Salad	5,000	4,800	8
Soups	4,000	4,400	12
Beverages	6,100	6,000	15
Dessert	4,000	4,000	20

Which item appears to have constant demand?

Alt1 Salad

Alt2 Soup

Alt3 Beverages

Alt4 Dessert

51

Answer the question based on the data given in the following table.

The following table shows the number of new employees added to different categories of employees in a company and also the number of employees from these categories who left the company every year since the foundation of the Company in 1995.

Year	Managers		Technicians		Operators		Accountants		Peons	
	New	Left	New	Left	New	Left	New	Left	New	Left
1995	760	-	1200	-	880	-	1160	-	820	-
1996	280	120	272	120	256	104	200	100	184	96
1997	179	92	240	128	240	120	224	104	152	88
1998	148	88	236	96	208	100	248	96	196	80
1999	160	72	256	100	192	112	272	88	224	120
2000	193	96	288	112	248	144	260	92	200	104

What is the difference between the total number of Technicians added to the Company and the total number of Accountants added to the Company during the years 1996 to 2000?

Alt1 88

Alt2 128

Alt3 98

Alt4 68



52

Answer the question based on the data given in the following table.

The following table shows the number of new employees added to different categories of employees in a company and also the number of employees from these categories who left the company every year since the foundation of the Company in 1995.

Year	Managers		Technicians		Operators		Accountants		Peons	
	New	Left	New	Left	New	Left	New	Left	New	Left
1995	760	-	1200	-	880	-	1160	-	820	-
1996	280	120	272	120	256	104	200	100	184	96
1997	179	92	240	128	240	120	224	104	152	88
1998	148	88	236	96	208	100	248	96	196	80
1999	160	72	256	100	192	112	272	88	224	120
2000	193	96	288	112	248	144	260	92	200	104

What was the total number of Peons working in the Company in the year 1999?

Alt1 1312

Alt2 1192

Alt3 1088

Alt4 968

53

Answer the question based on the data given in the following table.

The following table shows the number of new employees added to different categories of employees in a company and also the number of employees from these categories who left the company every year since the foundation of the Company in 1995.

Year	Managers		Technicians		Operators		Accountants		Peons	
	New	Left	New	Left	New	Left	New	Left	New	Left
1995	760	-	1200	-	880	-	1160	-	820	-
1996	280	120	272	120	256	104	200	100	184	96
1997	179	92	240	128	240	120	224	104	152	88
1998	148	88	236	96	208	100	248	96	196	80
1999	160	72	256	100	192	112	272	88	224	120
2000	193	96	288	112	248	144	260	92	200	104

For which of the following categories the percentage increase in the number of employees working in the Company from 1995 to 2000 was the maximum?

Alt1 Managers

Alt2 Technicians

Alt3	Operators
Alt4	Accountants

54

Answer the question based on the data given in the following table.

The following table shows the number of new employees added to different categories of employees in a company and also the number of employees from these categories who left the company every year since the foundation of the Company in 1995.

Year	Managers		Technicians		Operators		Accountants		Peons	
	New	Left	New	Left	New	Left	New	Left	New	Left
1995	760	-	1200	-	880	-	1160	-	820	-
1996	280	120	272	120	256	104	200	100	184	96
1997	179	92	240	128	240	120	224	104	152	88
1998	148	88	236	96	208	100	248	96	196	80
1999	160	72	256	100	192	112	272	88	224	120
2000	193	96	288	112	248	144	260	92	200	104

What is the pooled average of the total number of employees of all categories in the year 1997?

Alt1 1325

Alt2 1195

Alt3 1265

Alt4 1235



55

Answer the question based on the data given in the following table.

The following table shows the number of new employees added to different categories of employees in a company and also the number of employees from these categories who left the company every year since the foundation of the Company in 1995.

Year	Managers		Technicians		Operators		Accountants		Peons	
	New	Left	New	Left	New	Left	New	Left	New	Left
1995	760	-	1200	-	880	-	1160	-	820	-
1996	280	120	272	120	256	104	200	100	184	96
1997	179	92	240	128	240	120	224	104	152	88
1998	148	88	236	96	208	100	248	96	196	80
1999	160	72	256	100	192	112	272	88	224	120
2000	193	96	288	112	248	144	260	92	200	104

During the period between 1995 and 2000, the total number of Operators who left the Company is what percent of total number of Operators who joined the Company?

Alt1 0.19

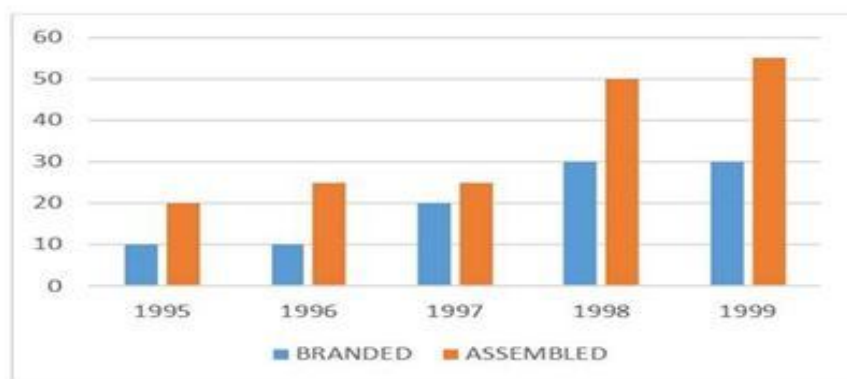
Alt2 0.21

Alt3 0.27

Alt4 0.29

56

Directions : Study the following graph carefully and answer the questions given below it:



What is the average percentage growth of sales of Assembled PCs for the given years?

Alt1 30

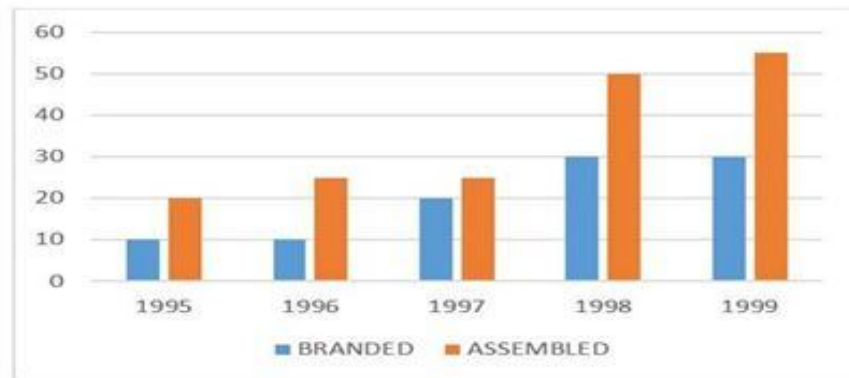
Alt2 12

Alt3 40

Alt4 35

57

Directions : Study the following graph carefully and answer the questions given below it:



If the Branded PCs sold in 1996 were 1,00,000, how many Branded PCs were sold in 1999?

Alt1 1,20,000

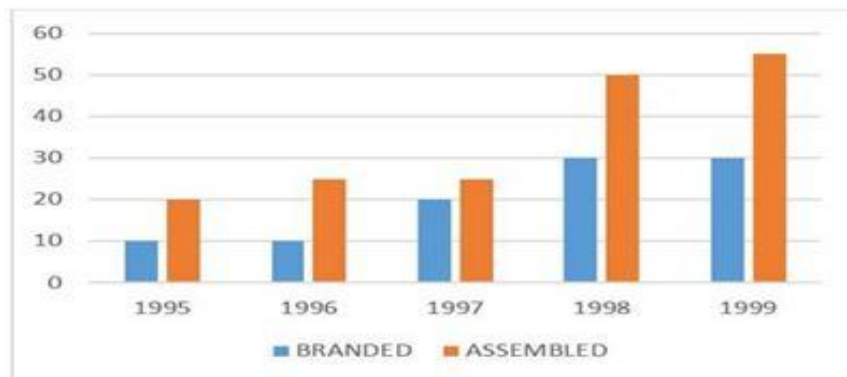
Alt2 2,02,800

Alt3 1,56,000

Alt4 2,34,000

58

Directions : Study the following graph carefully and answer the questions given below it:



What is the difference between total Branded the total Assembled PCs sold for the given years?

Alt1 75000

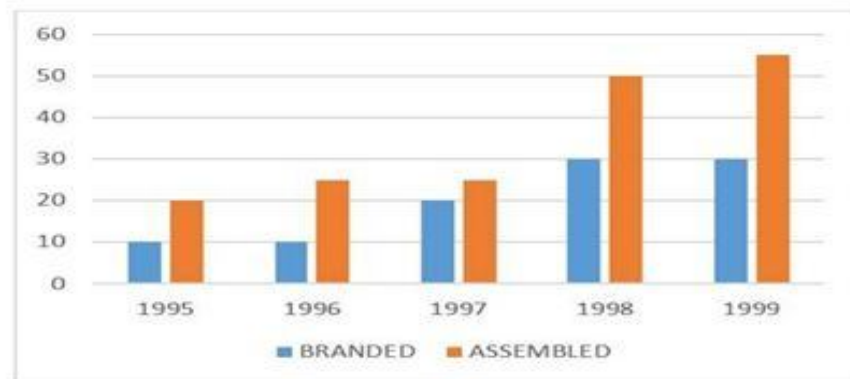
Alt2 7,50,000

Alt3 1,75,000

Alt4 5,00,000

59

Directions : Study the following graph carefully and answer the questions given below it:



In which year is the difference in the growth between Branded and Assembled the lowest?

Alt1 1995

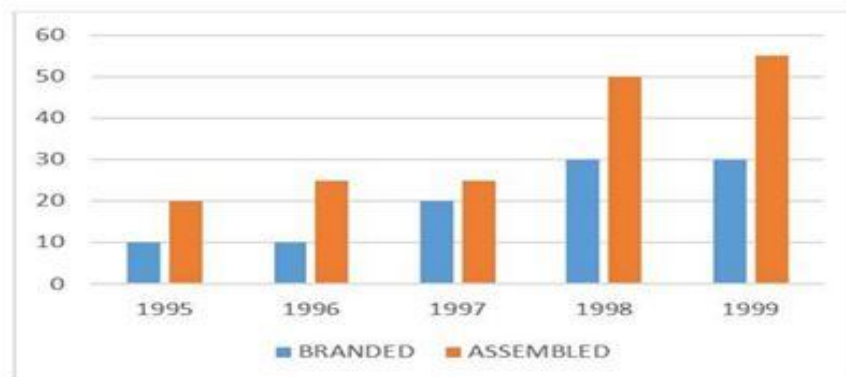
Alt2 1998

Alt3 1999

Alt4 1997

60

Directions : Study the following graph carefully and answer the questions given below it:



For Assembled PC sale, which year the per cent growth is the highest compared to previous year?

Alt1 1999

Alt2 1996

Alt3 1998

Alt4 1997

61 In a certain code 'INACTIVE' is written as VITCANIE. How is 'COMPUTER' written in that code?

Alt1 UTEPMOCR

Alt2 MOCPETUR

Alt3 ETUPMOCR

Alt4 PMOCRETU

62	<p>"Direction: Consider the given information and choose the right answer.</p> <p>Fact 1: Some pens don't write.</p> <p>Fact 2: All blue pens write.</p> <p>Fact 3: Some writing utensils are pens.</p> <p>If the first three statements are facts, which of the following statements must also be a fact?</p> <p>i. Some writing utensils don't write.</p> <p>ii. Some writing utensils are blue.</p> <p>iii. Some blue writing utensils don't write.</p>
Alt1	ii only
Alt2	i and ii only
Alt3	ii and iii only
Alt4	None of the statements is a known fact

63	<p>Direction: Read the following information and answer the question that follow</p> <p>Six friends are sitting in a circle and are facing the centre of the circle. Deepa is between Prakash and Pankaj. Priti is between Mukesh and Lalit. Prakash and Mukesh are opposite to each other. Who are the neighbours of Mukesh?</p>
Alt1	Prakash and Deepa
Alt2	Deepa and Priti
Alt3	Priti and Pankaj
Alt4	Lalit and Priti

64	<p>Which of the following letters would come in place of the question mark (?) in the given series?</p> <p>AYD, BVF, DRH, ?, KGL</p>
Alt1	FMI
Alt2	GMJ
Alt3	HLK
Alt4	GLJ

65	<p>A told B that C is his father's nephew. D is A's cousin but not the brother of C. What relationship is there between D and C?</p>
Alt1	Father
Alt2	Sisters
Alt3	Aunt
Alt4	Mother

66	During which month are the fewest lectures given?
	<p>Directions : Use the following information for answering the above question:</p> <p>A management department organises six once a month lecture series for 1 year students as per the following schedule, with no dates conflicting:</p> <p>Marketing : August – January</p> <p>Economics : April –October</p> <p>Business Law : January – September</p> <p>Finance : March –June</p> <p>Accounting : October – April</p> <p>HRM : October – December</p>
Alt1	January
Alt2	February
Alt3	June
Alt4	September

67	What is the largest number of lectures that can be attended in a single month?
	<p>Directions : Use the following information for answering the above question:</p> <p>A management department organises six once a month lecture series for 1 year students as per the following schedule, with no dates conflicting:</p> <p>Marketing : August – January</p> <p>Economics : April –October</p> <p>Business Law : January – September</p> <p>Finance : March –June</p> <p>Accounting : October – April</p> <p>HRM : October – December</p>
Alt1	7
Alt2	6
Alt3	5
Alt4	4

68	What two series taken together fill the year without overlapping?
----	---

	<p>Directions : Use the following information for answering the above question:</p> <p>A management department organises six once a month lecture series for 1 year students as per the following schedule, with no dates conflicting:</p> <p>Marketing : August – January</p> <p>Economics : April –October</p> <p>Business Law : January – September</p> <p>Finance : March –June</p> <p>Accounting : October – April</p> <p>HRM : October – December</p>
Alt1	Marketing and Finance
Alt2	HRM and Economics
Alt3	Business Law and HRM
Alt4	Business Law and Accounting

69	During how many months of the year must a student attend to hear all the lectures in Marketing, Economics and Finance?
	<p>Directions : Use the following information for answering the above question:</p> <p>A management department organises six once a month lecture series for 1 year students as per the following schedule, with no dates conflicting:</p> <p>Marketing : August – January</p> <p>Economics : April –October</p> <p>Business Law : January – September</p> <p>Finance : March –June</p> <p>Accounting : October – April</p> <p>HRM : October – December</p>
Alt1	11
Alt2	12
Alt3	9
Alt4	4

70	How many lecture series last more than 6 months?
----	--



	<p>Directions : Use the following information for answering the above question:</p> <p>A management department organises six once a month lecture series for 1 year students as per the following schedule, with no dates conflicting:</p> <p>Marketing : August – January</p> <p>Economics : April –October</p> <p>Business Law : January – September</p> <p>Finance : March –June</p> <p>Accounting : October – April</p> <p>HRM : October – December</p>
Alt1	1
Alt2	2
Alt3	3
Alt4	4

71	How many different series can be attended in September, October and November?
	<p>Directions : Use the following information for answering the above question:</p> <p>A management department organises six once a month lecture series for 1 year students as per the following schedule, with no dates conflicting:</p> <p>Marketing : August – January</p> <p>Economics : April –October</p> <p>Business Law : January – September</p> <p>Finance : March –June</p> <p>Accounting : October – April</p> <p>HRM : October – December</p>
Alt1	2
Alt2	3
Alt3	4
Alt4	5

72	How many different lectures can be attended in January, February and March?
----	---

	<p>Directions : Use the following information for answering the above question:</p> <p>A management department organises six once a month lecture series for I year students as per the following schedule, with no dates conflicting:</p> <p>Marketing : August – January</p> <p>Economics : April –October</p> <p>Business Law : January – September</p> <p>Finance : March –June</p> <p>Accounting : October – April</p> <p>HRM : October – December</p>
Alt1	10
Alt2	3
Alt3	5
Alt4	0

73	<p>Direction: Read the following information carefully and answer the question given below:</p> <p>Five friends Michael, Mark, Lewis, Karan, and Jenson are students of five different disciplines Medical, Engineering, Architecture, Arts, Management, and each plays a different musical instrument Sitar, Tabla, Sarod, Guitar and Violin.</p> <p>Lewis, a medical student, does not play Sarod or Sitar nor Guitar.</p> <p>Jenson is neither a student of engineering nor management.</p> <p>Karan, who plays Tabla, is an Arts student.</p> <p>Neither Jenson nor Michael plays Sarod.</p> <p>Who among the following plays Sitar?</p>
Alt1	Michae
Alt2	Jenson
Alt3	Mark
Alt4	Data inadequate



74	<p>Direction: Consider the information given below and answer the following question.</p> <p>(i) Six students A,B,C,D, E and F participated in a self-evaluation test of quants and Data Interpretation (DI).</p> <p>(ii) The total marks of A in Quants was just above C and in DI just above F</p> <p>(iii) B was just above C in DI but he scored less than D in Quants</p> <p>(iv) F got more marks than D and E in DI but did not perform as well in Quants as DI</p> <p>(v) No one is in between C and D in quants and C and A in DI</p> <p>Who was just below D in Quants?</p>
Alt1	C
Alt2	B
Alt3	E
Alt4	Data inadequate

75	The average age of 8 persons is increased by 2 years, when one of them, whose age is 24 years, is replaced by a new person. The age of the new person is _____.
Alt1	40
Alt2	45
Alt3	38
Alt4	42

76	<p>Direction: Consider the information given below and answer the following question.</p> <p>(i) Six students A,B,C,D, E and F participated in a self-evaluation test of quants and Data Interpretation (DI).</p> <p>(ii) The total marks of A in Quants was just above C and in DI just above F</p> <p>(iii) B was just above C in DI but he scored less than D in Quants</p> <p>(iv) F got more marks than D and E in DI but did not perform as well in Quants as DI</p> <p>(v) No one is in between C and D in quants and C and A in DI</p> <p>Which of the following students has scored the least in DI?</p>
Alt1	Only D
Alt2	Only E
Alt3	B

Alt4	Both D and E
------	--------------

77	The letters in the first set have certain relationships. On the basis of the relationship which is the right choice for the second set? BF: GK::LP: ?
Alt1	JK
Alt2	QU
Alt3	VW
Alt4	RQ

78	In the English alphabet, which letter is fifteenth to the right of the letter which is third to the left of J?
Alt1	V
Alt2	S
Alt3	U
Alt4	Y

79	<p>"Direction: Read the following information carefully and answer the question given below:</p> <p>Five friends Michael, Mark, Lewis, Karan, and Jenson are students of five different disciplines Medical, Engineering, Architecture, Arts, Management, and each plays a different musical instrument Sitar, Tabla, Sarod, Guitar and Violin.</p> <p>Lewis, a medical student, does not play Sarod or Sitar nor Guitar.</p> <p>Jenson is neither a student of engineering nor management.</p> <p>Karan, who plays Tabla, is an Arts student.</p> <p>Neither Jenson nor Michael plays Sarod.</p> <p>Who among the following plays Sarod?</p>
Alt1	Mark
Alt2	Michael
Alt3	Jenson
Alt4	Data inadequate

80	Given that in a code language, '645' means 'day is warm'; '42' means 'warm spring' and '634' means 'spring is sunny'; which digit represents 'sunny' ?
Alt1	3
Alt2	4
Alt3	5
Alt4	2

81	BRICS Bank headquarters is in:
----	--------------------------------

Alt1	India
Alt2	China
Alt3	Brazil
Alt4	Russia

82	The capital of Yemen:
Alt1	Djuboti
Alt2	Eden
Alt3	Sanaa
Alt4	Sadaa

83	Government of India is giving much emphasis on 'Women Empowerment' these days. What does it mean?
Alt1	Recruiting only women for various Government jobs.
Alt2	Electing women only for Panchayat Raj institutions
Alt3	Ensure that women get equal pay for equal work
Alt4	Providing opportunities to women so that they can de-velop themselves

84	The National Stock Exchange is located in.....
Alt1	Newdelhi
Alt2	Mumbai
Alt3	Kolkatta
Alt4	Chennai

85	Which of the following com-modities is a major item of the export from India to many countries?
Alt1	Vegetable
Alt2	Paddy
Alt3	Tea
Alt4	All of the above

86	Santhosh Trophy is associated with.
Alt1	Cricket
Alt2	Football
Alt3	Hockey
Alt4	Tennis

87	Index of Industrial Production is released by:
Alt1	FICCI
Alt2	RBI
Alt3	CSO
Alt4	ASSOCHAM

88	NASA has named a new species in the name of :
Alt1	Mahatma Gandhi
Alt2	Jawaharlal Nehru
Alt3	Sachin Tendulkar
Alt4	APJ Abdul Kalam

89	Which of the following is a private bank operating in India?
Alt1	Dena Bank
Alt2	Andhra Bank
Alt3	Axis Bank
Alt4	Punjab National Bank

90	Rupee is the currency of:
Alt1	Bangladesh
Alt2	Myanmar
Alt3	Nepal
Alt4	Indonesia

91	What is the abbreviation of YAHOO?
Alt1	Yet Another Hierarchical Officious Oracle
Alt2	yahoo Another Hierarchical Officious Oracle
Alt3	Yet Another Hierarchical officio oracular
Alt4	Young Anchor Hierarchical Officious oracular

92	What is the innovative scheme to develop the regional aviation market?
Alt1	UDDAN
Alt2	UDAN
Alt3	UDHAN
Alt4	UDAAN

93	What is the recent smart messaging application launched by google?
Alt1	ALLO
Alt2	HELO
Alt3	ALOO
Alt4	AALO

94	Which company has decided to invest \$150 million for Indian Startup's?
Alt1	Qualcomm
Alt2	Google
Alt3	Yahoo
Alt4	Microsoft

95	Which scheme will be implemented using the money saved in LPG subsidy through "Give it up" campaign?
Alt1	Sukanya Samridhi Yojana
Alt2	Beti Bacchao Beti Padhao Yojana
Alt3	Pradhan Mantri Ujjwala Yojana
Alt4	Pradhan Mantri Kaushal Vikas Yojana

96	The length of the spinal cord is about .....
Alt1	70 cm
Alt2	45 cm

Alt3	35 cm
Alt4	60 cm

97	Which Nation has won its gold medal in Soccer in the 2016 Olympics?
Alt1	Brazil
Alt2	Australia
Alt3	Germany
Alt4	France

98	Which of the following card is India's own domestic card with its own payment gateway with less transaction cost?
Alt1	Master Card
Alt2	Maestro Card
Alt3	Visa Card
Alt4	Rupay Card

99	Which state became the first to adopt January to December fiscal year?
Alt1	Madhya Pradesh
Alt2	Andhra Pradesh
Alt3	Kerala
Alt4	Himachal Pradesh

100	Which of the following is not a Payment bank?
Alt1	Paytm
Alt2	Airtel
Alt3	Freecharge
Alt4	India post